



In this study, we will ask you to compare an original rough drawing against two possible cleaned-up versions. We need your opinion on their accuracy. The following image shows examples of what this concept means.




Questionnaire 1, Question 1 / 32


Which of the clean drawings below, B or C, more accurately depicts the rough drawing A on top? If both are equally accurate, please select "Both B and C". If neither, select "Neither B nor C".



A.



B. ([Liu et al. 2018] - 0 votes)




C. (Ours - 6 votes)

Both B and C (0 votes)


Neither B nor C (0 votes)

Questionnaire 1, Question 2 / 32


Which of the clean drawings below, B or C, more accurately depicts the rough drawing A on top? If both are equally accurate, please select "Both B and C". If neither, select "Neither B nor C".



A.



B. (Ours - 5 votes)




C. ([Liu et al. 2018] - 0 votes)

Both B and C (1 vote)

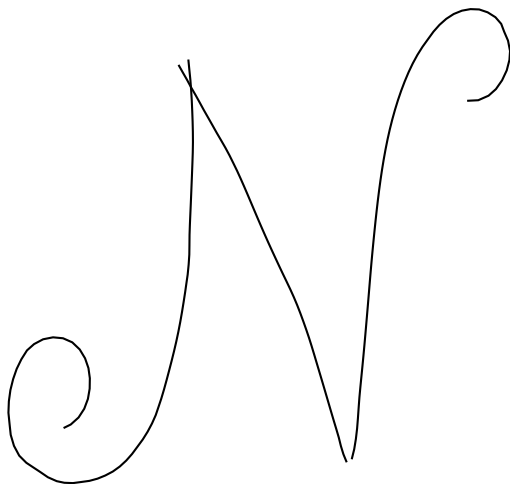
Neither B nor C (0 votes)

Questionnaire 1, Question 3 / 32


Which of the clean drawings below, B or C, more accurately depicts the rough drawing A on top? If both are equally accurate, please select "Both B and C". If neither, select "Neither B nor C".



A.



B. ([Liu et al. 2018] - 0 votes)




C. (Ours - 6 votes)

Both B and C (0 votes)


Neither B nor C (0 votes)

Questionnaire 1, Question 4 / 32


Which of the clean drawings below, B or C, more accurately depicts the rough drawing A on top? If both are equally accurate, please select "Both B and C". If neither, select "Neither B nor C".



A.



B. (Ours - 6 votes)



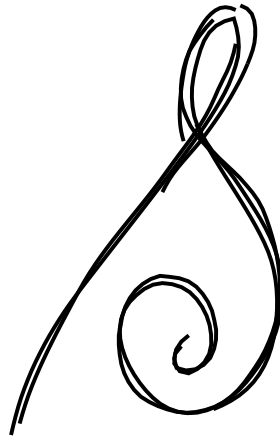
C. ([Liu et al. 2018] - 0 votes)

Both B and C (0 votes)


Neither B nor C (0 votes)

Questionnaire 1, Question 5 / 32


Which of the clean drawings below, B or C, more accurately depicts the rough drawing A on top? If both are equally accurate, please select "Both B and C". If neither, select "Neither B nor C".



A.



B. (Ours - 6 votes)




C. ([Liu et al. 2018] - 0 votes)

Both B and C (0 votes)


Neither B nor C (0 votes)

Questionnaire 1, Question 6 / 32


Which of the clean drawings below, B or C, more accurately depicts the rough drawing A on top? If both are equally accurate, please select "Both B and C". If neither, select "Neither B nor C".



A.



B. ([Orbay and Kara 2011] - 0 votes)



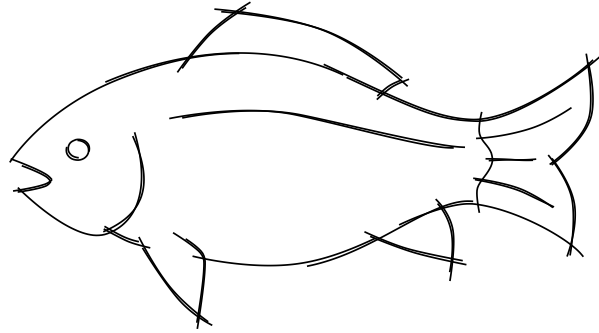
C. (Ours - 6 votes)

Both B and C (0 votes)

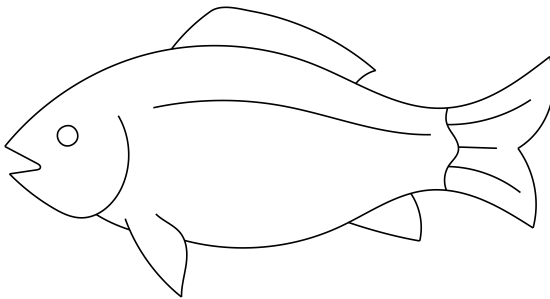
Neither B nor C (0 votes)

Questionnaire 1, Question 7 / 32

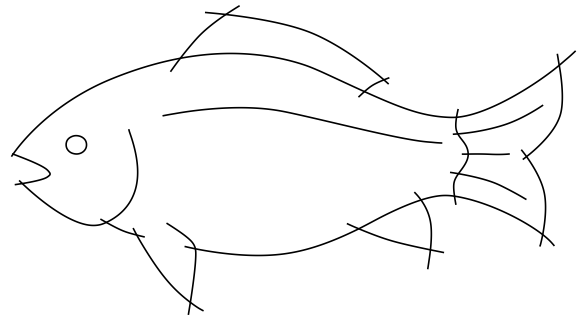
Which of the clean drawings below, B or C, more accurately depicts the rough drawing A on top? If both are equally accurate, please select "Both B and C". If neither, select "Neither B nor C".



A.



B. (Human - 2 votes)




C. (Ours - 3 votes)

Both B and C (1 vote)


Neither B nor C (0 votes)

Questionnaire 1, Question 8 / 32


Which of the clean drawings below, B or C, more accurately depicts the rough drawing A on top? If both are equally accurate, please select "Both B and C". If neither, select "Neither B nor C".



A.



B. ([Orbay and Kara 2011] - 0 votes)




C. (Ours - 1 vote)

Both B and C (5 votes)


Neither B nor C (0 votes)

Questionnaire 1, Question 9 / 32


Which of the clean drawings below, B or C, more accurately depicts the rough drawing A on top? If both are equally accurate, please select "Both B and C". If neither, select "Neither B nor C".



A.



B. (Ours - 4 votes)



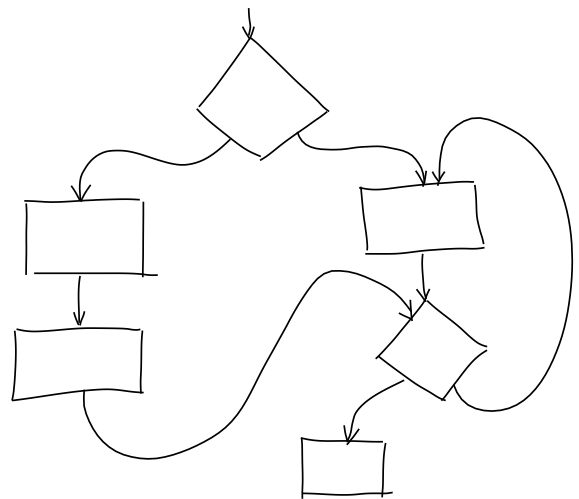
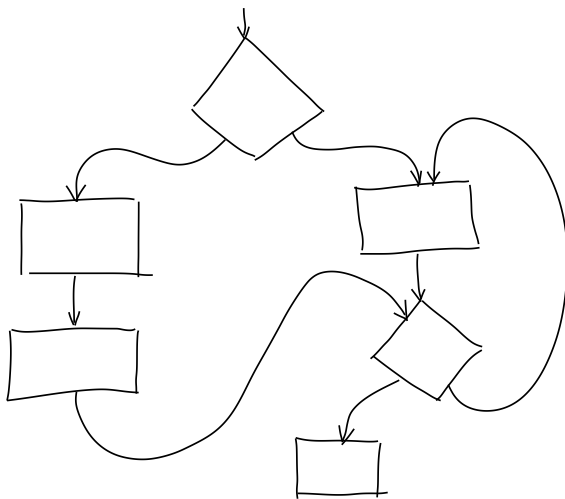
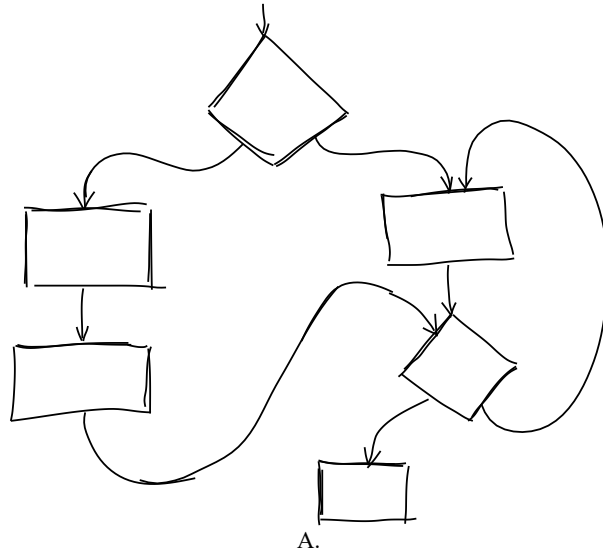
C. ([Orbay and Kara 2011] - 1 vote)

Both B and C (1 vote)

Neither B nor C (0 votes)

Questionnaire 1, Question 10 / 32

Which of the clean drawings below, B or C, more accurately depicts the rough drawing A on top? If both are equally accurate, please select "Both B and C". If neither, select "Neither B nor C".



Both B and C (5 votes)


Neither B nor C (0 votes)

Questionnaire 1, Question 11 / 32


Which of the clean drawings below, B or C, more accurately depicts the rough drawing A on top? If both are equally accurate, please select "Both B and C". If neither, select "Neither B nor C".



A.



B. ([Liu et al. 2018] - 0 votes)



C. (Ours - 5 votes)

Both B and C (1 vote)

Neither B nor C (0 votes)

Questionnaire 1, Question 12 / 32

Which of the clean drawings below, B or C, more accurately depicts the rough drawing A on top? If both are equally accurate, please select "Both B and C". If neither, select "Neither B nor C".



A.



B. ([Orbay and Kara 2011] - 0 votes)




C. (Ours - 4 votes)

Both B and C (2 votes)


Neither B nor C (0 votes)

Questionnaire 1, Question 13 / 32

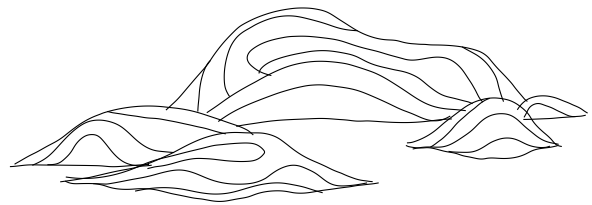
Which of the clean drawings below, B or C, more accurately depicts the rough drawing A on top? If both are equally accurate, please select "Both B and C". If neither, select "Neither B nor C".



A.



B. ([Liu et al. 2018] - 0 votes)



C. (Ours - 3 votes)

Both B and C (3 votes)

Neither B nor C (0 votes)

Questionnaire 1, Question 14 / 32

Which of the clean drawings below, B or C, more accurately depicts the rough drawing A on top? If both are equally accurate, please select "Both B and C". If neither, select "Neither B nor C".



A.



B. ([Liu et al. 2018] - 1 vote)



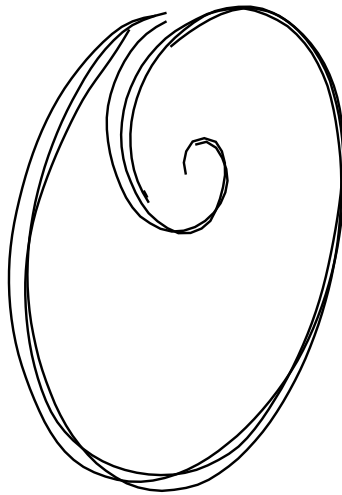
C. (Ours - 0 votes)

Both B and C (5 votes)

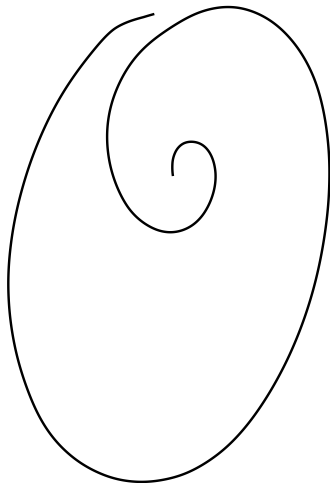
Neither B nor C (0 votes)

Questionnaire 1, Question 15 / 32

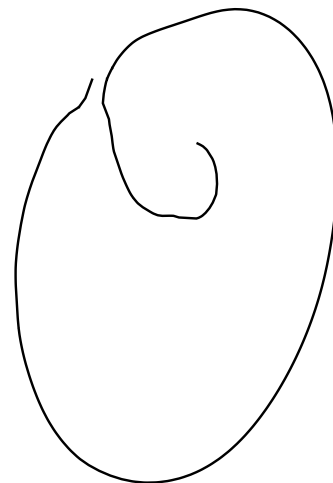
Which of the clean drawings below, B or C, more accurately depicts the rough drawing A on top? If both are equally accurate, please select "Both B and C". If neither, select "Neither B nor C".



A.



B. (Ours - 5 votes)




C. ([Orbay and Kara 2011] - 0 votes)

Both B and C (0 votes)


Neither B nor C (1 vote)

Questionnaire 1, Question 16 / 32


Which of the clean drawings below, B or C, more accurately depicts the rough drawing A on top? If both are equally accurate, please select "Both B and C". If neither, select "Neither B nor C".



A.



B. (Ours - 3 votes)



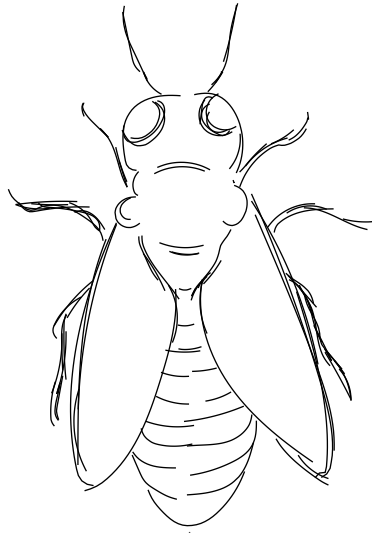
C. ([Liu et al. 2018] - 2 votes)

Both B and C (1 vote)


Neither B nor C (0 votes)

Questionnaire 1, Question 17 / 32


Which of the clean drawings below, B or C, more accurately depicts the rough drawing A on top? If both are equally accurate, please select "Both B and C". If neither, select "Neither B nor C".



A.



B. ([Liu et al. 2018] - 0 votes)




C. (Ours - 1 vote)

Both B and C (4 votes)


Neither B nor C (1 vote)

Questionnaire 1, Question 18 / 32

Which of the clean drawings below, B or C, more accurately depicts the rough drawing A on top? If both are equally accurate, please select "Both B and C". If neither, select "Neither B nor C".



A.



B. ([Orbay and Kara 2011] - 0 votes)

C. (Ours - 6 votes)

Both B and C (0 votes)

Neither B nor C (0 votes)

Questionnaire 1, Question 19 / 32

Which of the clean drawings below, B or C, more accurately depicts the rough drawing A on top? If both are equally accurate, please select "Both B and C". If neither, select "Neither B nor C".



A.



B. (Ours - 5 votes)




C. ([Liu et al. 2018] - 0 votes)

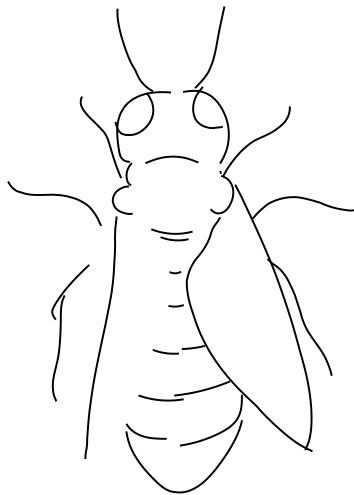
Both B and C (1 vote)

Neither B nor C (0 votes)

Which of the clean drawings below, B or C, more accurately depicts the rough drawing A on top? If both are equally accurate, please select "Both B and C". If neither, select "Neither B nor C".



A.



B. ([Liu et al. 2018] - 0 votes)



C. (Ours - 5 votes)

Both B and C (0 votes)


Neither B nor C (1 vote)

Questionnaire 1, Question 21 / 32


Which of the clean drawings below, B or C, more accurately depicts the rough drawing A on top? If both are equally accurate, please select "Both B and C". If neither, select "Neither B nor C".



A.



B. (Ours - 0 votes)



C. (Human - 3 votes)

Both B and C (3 votes)


Neither B nor C (0 votes)

Questionnaire 1, Question 22 / 32


Which of the clean drawings below, B or C, more accurately depicts the rough drawing A on top? If both are equally accurate, please select "Both B and C". If neither, select "Neither B nor C".



A.



B. (Human - 3 votes)




C. (Ours - 2 votes)

Both B and C (1 vote)

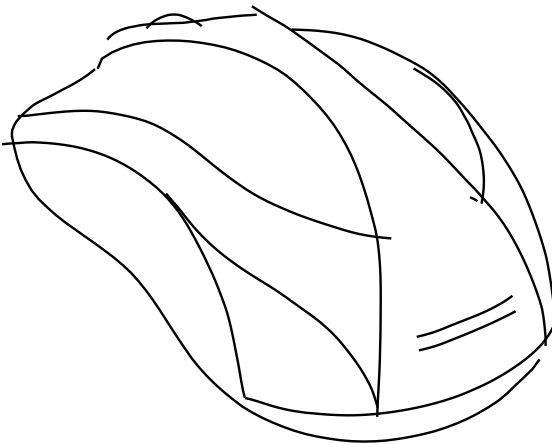
Neither B nor C (0 votes)

Questionnaire 1, Question 23 / 32

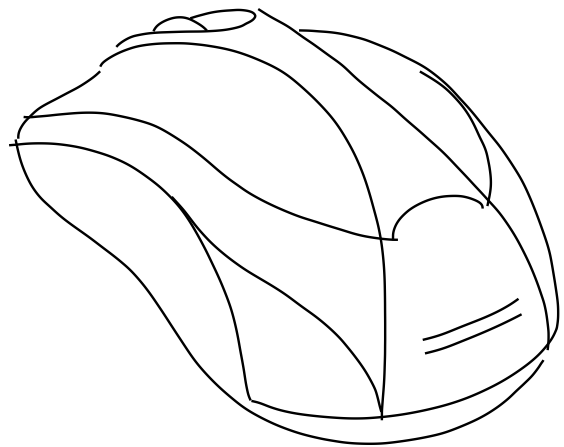
Which of the clean drawings below, B or C, more accurately depicts the rough drawing A on top? If both are equally accurate, please select "Both B and C". If neither, select "Neither B nor C".



A.



B. ([Liu et al. 2018] - 0 votes)



C. (Ours - 6 votes)

Both B and C (0 votes)

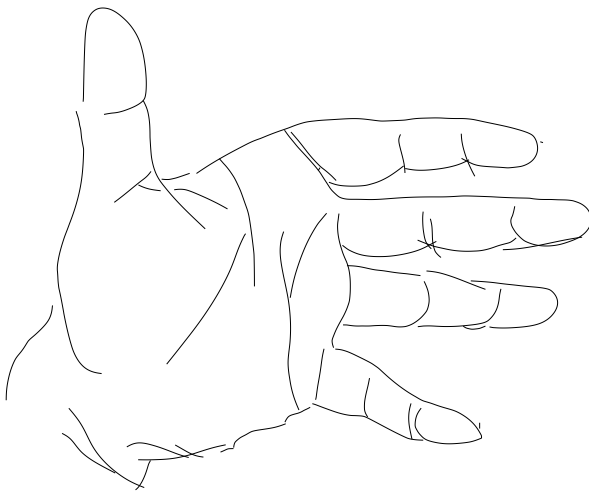
Neither B nor C (0 votes)

Questionnaire 1, Question 24 / 32

Which of the clean drawings below, B or C, more accurately depicts the rough drawing A on top? If both are equally accurate, please select "Both B and C". If neither, select "Neither B nor C".



A.



B. (Ours - 4 votes)



C. ([Orbay and Kara 2011] - 0 votes)


Both B and C (0 votes)

Neither B nor C (2 votes)


Which of the clean drawings below, B or C, more accurately depicts the rough drawing A on top? If both are equally accurate, please select "Both B and C". If neither, select "Neither B nor C".



A.



B. (Ours - 6 votes)



C. ([Liu et al. 2018] - 0 votes)

Both B and C (0 votes)

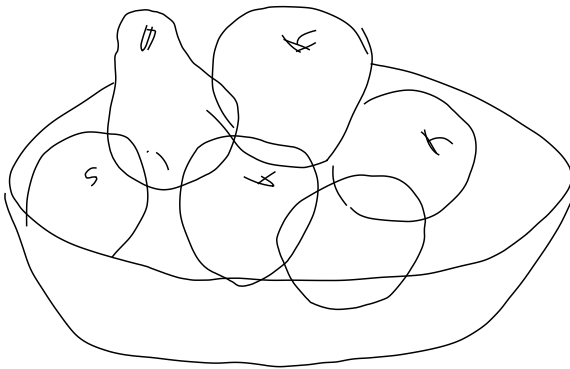
Neither B nor C (0 votes)

Questionnaire 1, Question 26 / 32

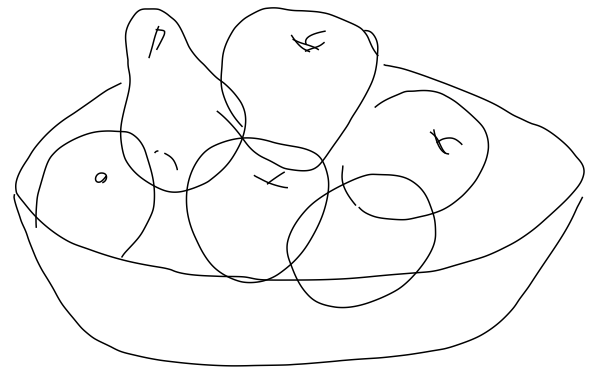
Which of the clean drawings below, B or C, more accurately depicts the rough drawing A on top? If both are equally accurate, please select "Both B and C". If neither, select "Neither B nor C".



A.



B. ([Orbay and Kara 2011] - 1 vote)




C. (Ours - 3 votes)

Both B and C (0 votes)


Neither B nor C (2 votes)

Questionnaire 1, Question 27 / 32


Which of the clean drawings below, B or C, more accurately depicts the rough drawing A on top? If both are equally accurate, please select "Both B and C". If neither, select "Neither B nor C".



A.



B. ([Liu et al. 2018] - 0 votes)




C. (Ours - 6 votes)


Both B and C (0 votes)

Neither B nor C (0 votes)


Which of the clean drawings below, B or C, more accurately depicts the rough drawing A on top? If both are equally accurate, please select "Both B and C". If neither, select "Neither B nor C".



A.



B. ([Orbay and Kara 2011] - 0 votes)




C. (Ours - 6 votes)


Both B and C (0 votes)

Neither B nor C (0 votes)


Which of the clean drawings below, B or C, more accurately depicts the rough drawing A on top? If both are equally accurate, please select "Both B and C". If neither, select "Neither B nor C".



A.



B. ([Orbay and Kara 2011] - 0 votes)




C. (Ours - 6 votes)


Both B and C (0 votes)

Neither B nor C (0 votes)


Which of the clean drawings below, B or C, more accurately depicts the rough drawing A on top? If both are equally accurate, please select "Both B and C". If neither, select "Neither B nor C".



A.



B. ([Liu et al. 2018] - 0 votes)




C. (Ours - 5 votes)

Both B and C (1 vote)

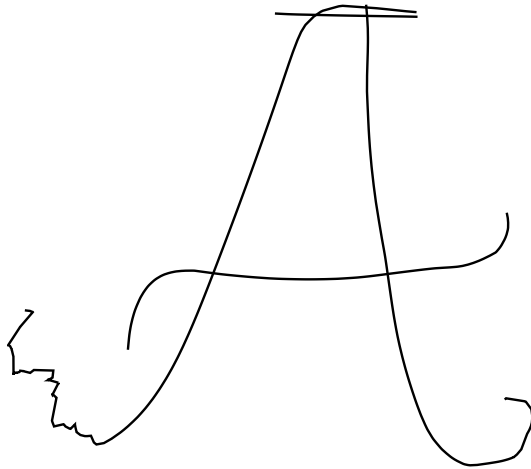
Neither B nor C (0 votes)

Questionnaire 1, Question 32 / 32

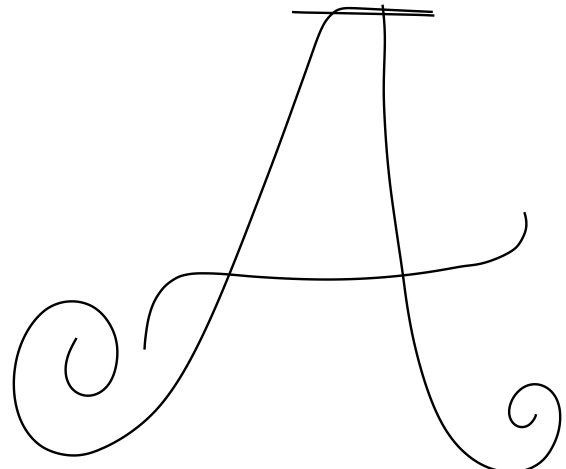
Which of the clean drawings below, B or C, more accurately depicts the rough drawing A on top? If both are equally accurate, please select "Both B and C". If neither, select "Neither B nor C".



A.



B. ([Orbay and Kara 2011] - 0 votes)



C. (Ours - 6 votes)

Both B and C (0 votes)

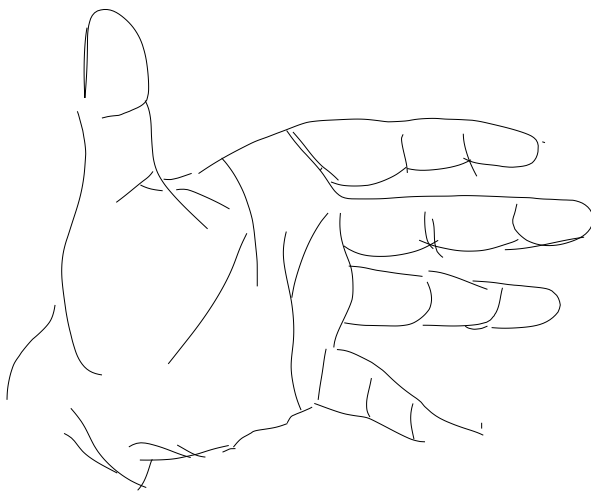
Neither B nor C (0 votes)

Questionnaire 2, Question 1 / 31

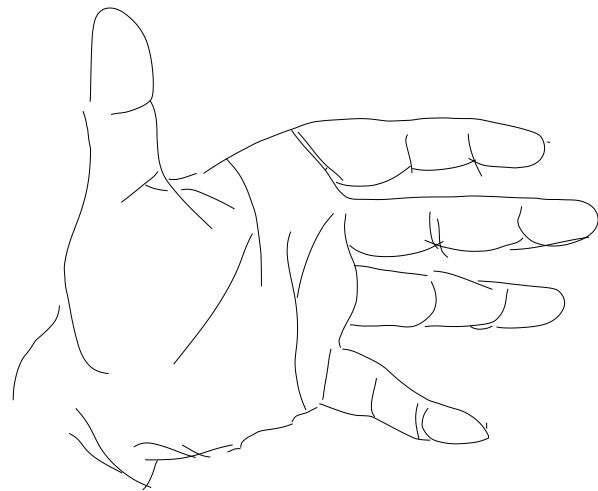
Which of the clean drawings below, B or C, more accurately depicts the rough drawing A on top? If both are equally accurate, please select "Both B and C". If neither, select "Neither B nor C".



A.



B. ([Liu et al. 2018] - 0 votes)




C. (Ours - 6 votes)

Both B and C (0 votes)


Neither B nor C (0 votes)

Questionnaire 2, Question 2 / 31


Which of the clean drawings below, B or C, more accurately depicts the rough drawing A on top? If both are equally accurate, please select "Both B and C". If neither, select "Neither B nor C".



A.



B. ([Orbay and Kara 2011] - 0 votes)




C. (Ours - 6 votes)

Both B and C (0 votes)


Neither B nor C (0 votes)

Questionnaire 2, Question 3 / 31


Which of the clean drawings below, B or C, more accurately depicts the rough drawing A on top? If both are equally accurate, please select "Both B and C". If neither, select "Neither B nor C".



A.



B. ([Orbay and Kara 2011] - 0 votes)



C. (Ours - 6 votes)

Both B and C (0 votes)

Neither B nor C (0 votes)

Questionnaire 2, Question 4 / 31

Which of the clean drawings below, B or C, more accurately depicts the rough drawing A on top? If both are equally accurate, please select "Both B and C". If neither, select "Neither B nor C".



A.



B. (Human - 1 vote)




C. (Ours - 0 votes)

Both B and C (5 votes)


Neither B nor C (0 votes)

Questionnaire 2, Question 5 / 31


Which of the clean drawings below, B or C, more accurately depicts the rough drawing A on top? If both are equally accurate, please select "Both B and C". If neither, select "Neither B nor C".



A.



B. (Ours - 6 votes)



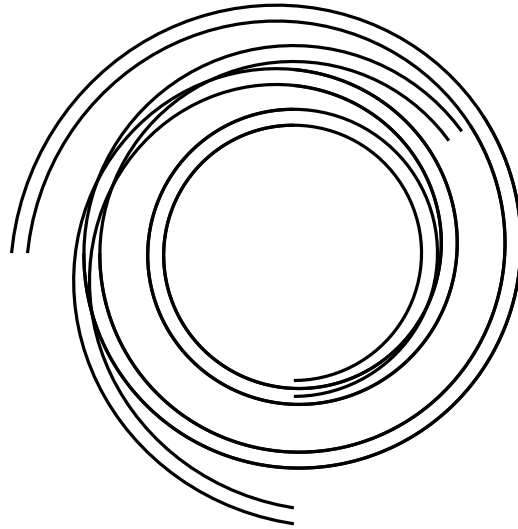
C. ([Liu et al. 2018] - 0 votes)

Both B and C (0 votes)


Neither B nor C (0 votes)

Questionnaire 2, Question 6 / 31

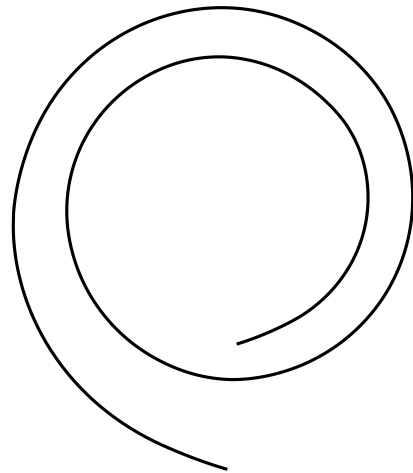
Which of the clean drawings below, B or C, more accurately depicts the rough drawing A on top? If both are equally accurate, please select "Both B and C". If neither, select "Neither B nor C".



A.



B. ([Liu et al. 2018] - 0 votes)




C. (Ours - 1 vote)

Both B and C (0 votes)


Neither B nor C (5 votes)

Questionnaire 2, Question 7 / 31


Which of the clean drawings below, B or C, more accurately depicts the rough drawing A on top? If both are equally accurate, please select "Both B and C". If neither, select "Neither B nor C".



A.



B. ([Orbay and Kara 2011] - 0 votes)



C. (Ours - 3 votes)

Both B and C (2 votes)

Neither B nor C (1 vote)

Questionnaire 2, Question 8 / 31


Which of the clean drawings below, B or C, more accurately depicts the rough drawing A on top? If both are equally accurate, please select "Both B and C". If neither, select "Neither B nor C".



A.



B. ([Orbay and Kara 2011] - 0 votes)




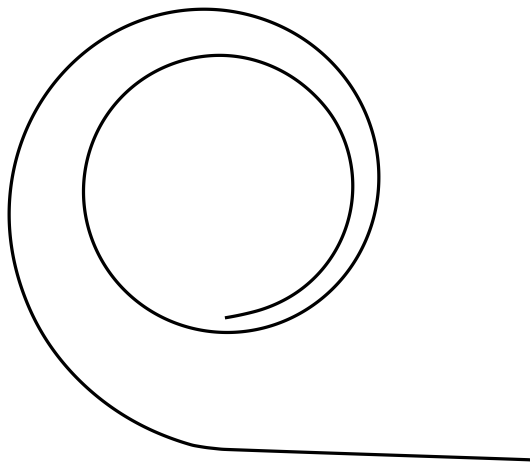
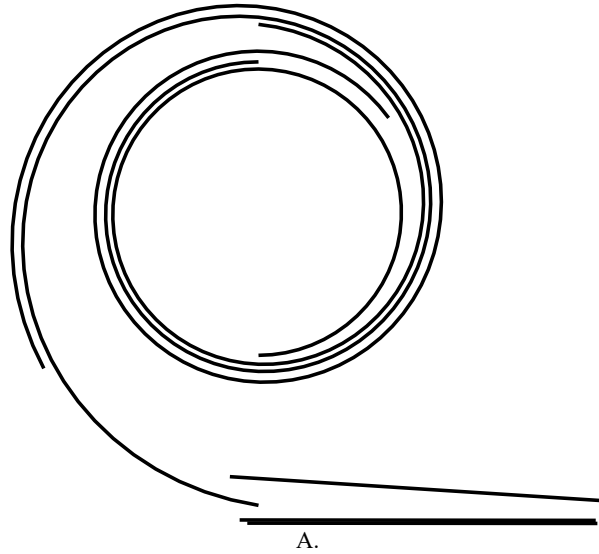
C. (Ours - 0 votes)

Both B and C (6 votes)

Neither B nor C (0 votes)

Questionnaire 2, Question 9 / 31

Which of the clean drawings below, B or C, more accurately depicts the rough drawing A on top? If both are equally accurate, please select "Both B and C". If neither, select "Neither B nor C".




Both B and C (0 votes)


Neither B nor C (0 votes)

Questionnaire 2, Question 10 / 31


Which of the clean drawings below, B or C, more accurately depicts the rough drawing A on top? If both are equally accurate, please select "Both B and C". If neither, select "Neither B nor C".



A.



B. ([Liu et al. 2018] - 0 votes)




C. (Ours - 0 votes)

Both B and C (6 votes)


Neither B nor C (0 votes)

Questionnaire 2, Question 11 / 31


Which of the clean drawings below, B or C, more accurately depicts the rough drawing A on top? If both are equally accurate, please select "Both B and C". If neither, select "Neither B nor C".



A.



B. ([Orbay and Kara 2011] - 0 votes)




C. (Ours - 6 votes)

Both B and C (0 votes)


Neither B nor C (0 votes)

Questionnaire 2, Question 12 / 31


Which of the clean drawings below, B or C, more accurately depicts the rough drawing A on top? If both are equally accurate, please select "Both B and C". If neither, select "Neither B nor C".



A.



B. (Ours - 6 votes)




C. ([Liu et al. 2018] - 0 votes)


Both B and C (0 votes)

Neither B nor C (0 votes)


Which of the clean drawings below, B or C, more accurately depicts the rough drawing A on top? If both are equally accurate, please select "Both B and C". If neither, select "Neither B nor C".



A.



B. (Ours - 6 votes)



C. ([Liu et al. 2018] - 0 votes)

Both B and C (0 votes)

Neither B nor C (0 votes)

Questionnaire 2, Question 14 / 31

Which of the clean drawings below, B or C, more accurately depicts the rough drawing A on top? If both are equally accurate, please select "Both B and C". If neither, select "Neither B nor C".



A.



B. (Ours - 0 votes)



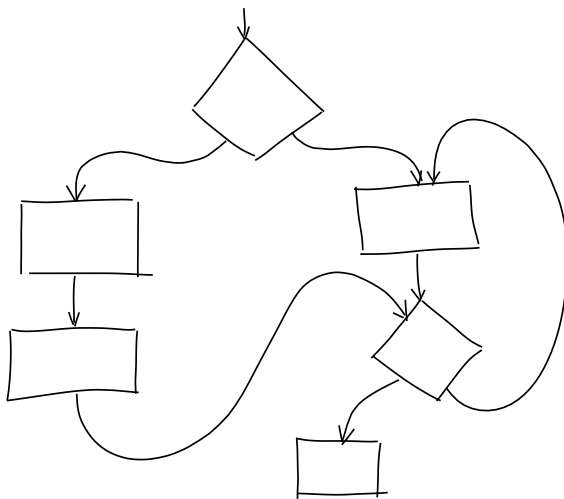
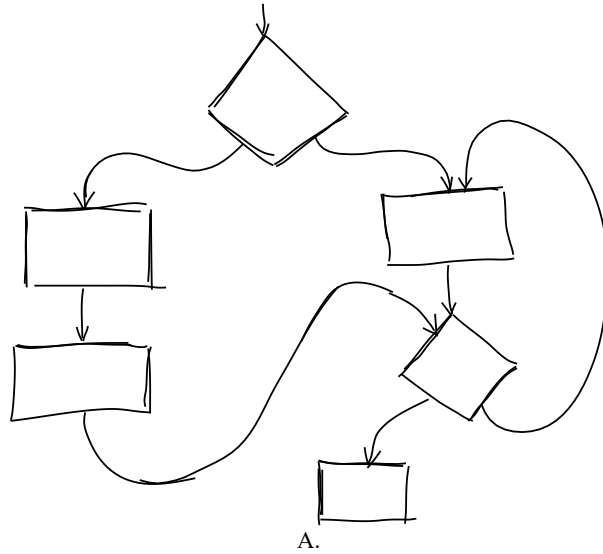
C. (Human - 1 vote)

Both B and C (5 votes)

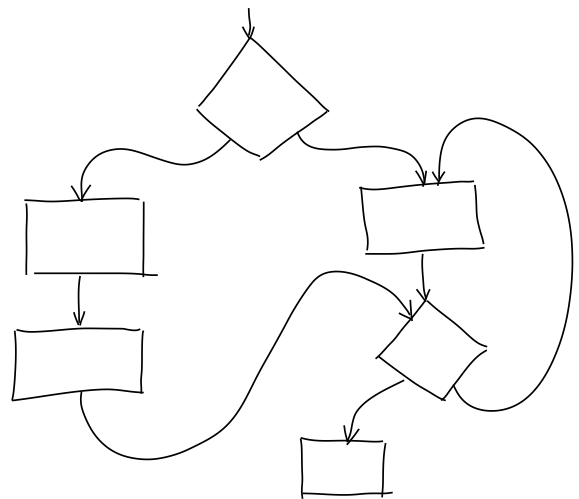
Neither B nor C (0 votes)

Questionnaire 2, Question 16 / 31

Which of the clean drawings below, B or C, more accurately depicts the rough drawing A on top? If both are equally accurate, please select "Both B and C". If neither, select "Neither B nor C".



B. ([Orbay and Kara 2011] - 0 votes)



C. (Ours - 1 vote)

Both B and C (5 votes)


Neither B nor C (0 votes)

Questionnaire 2, Question 17 / 31


Which of the clean drawings below, B or C, more accurately depicts the rough drawing A on top? If both are equally accurate, please select "Both B and C". If neither, select "Neither B nor C".



A.



B. ([Liu et al. 2018] - 0 votes)




C. (Ours - 5 votes)

Both B and C (1 vote)


Neither B nor C (0 votes)

Questionnaire 2, Question 18 / 31


Which of the clean drawings below, B or C, more accurately depicts the rough drawing A on top? If both are equally accurate, please select "Both B and C". If neither, select "Neither B nor C".



A.



B. (Ours - 5 votes)




C. ([Orbay and Kara 2011] - 0 votes)

Both B and C (1 vote)


Neither B nor C (0 votes)

Questionnaire 2, Question 19 / 31

Which of the clean drawings below, B or C, more accurately depicts the rough drawing A on top? If both are equally accurate, please select "Both B and C". If neither, select "Neither B nor C".



A.



B. (Ours - 3 votes)



C. ([Orbay and Kara 2011] - 1 vote)

Both B and C (0 votes)

Neither B nor C (2 votes)

Which of the clean drawings below, B or C, more accurately depicts the rough drawing A on top? If both are equally accurate, please select "Both B and C". If neither, select "Neither B nor C".



A.



B. (Ours - 1 vote)



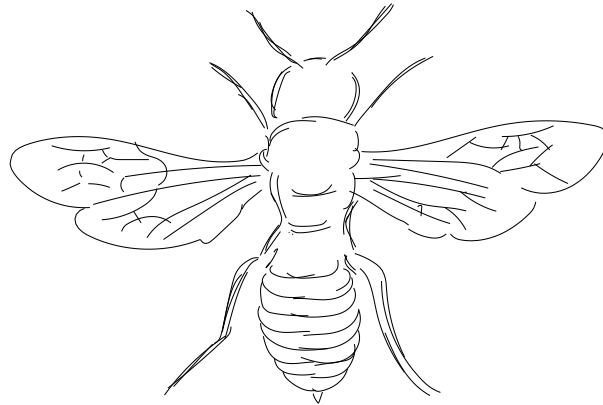
C. (Human - 2 votes)

Both B and C (3 votes)

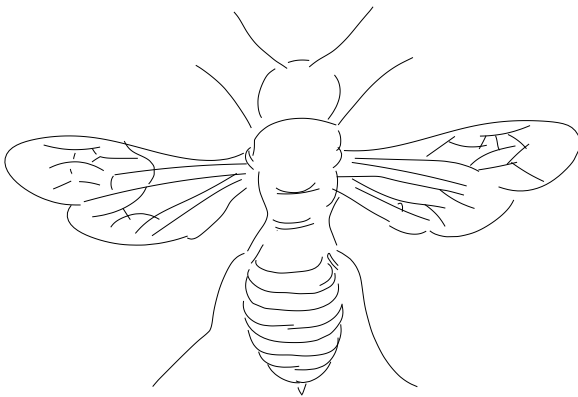
Neither B nor C (0 votes)

Questionnaire 2, Question 21 / 31

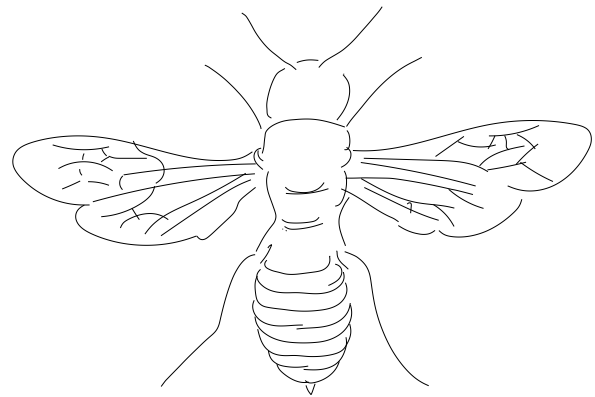
Which of the clean drawings below, B or C, more accurately depicts the rough drawing A on top? If both are equally accurate, please select "Both B and C". If neither, select "Neither B nor C".



A.



B. ([Orbay and Kara 2011] - 0 votes)



C. (Ours - 0 votes)


Both B and C (6 votes)

Neither B nor C (0 votes)


Which of the clean drawings below, B or C, more accurately depicts the rough drawing A on top? If both are equally accurate, please select "Both B and C". If neither, select "Neither B nor C".



A.



B. ([Liu et al. 2018] - 0 votes)



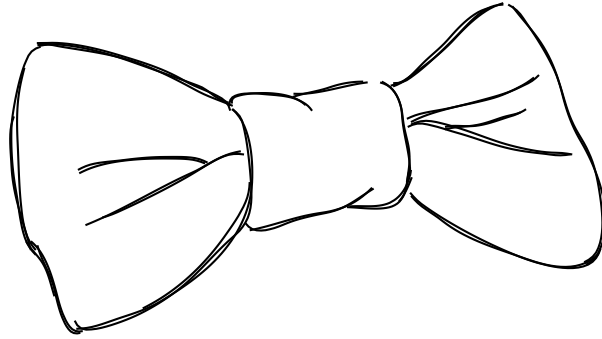
C. (Ours - 3 votes)

Both B and C (3 votes)

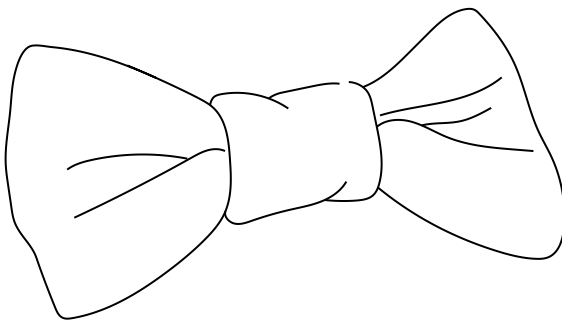
Neither B nor C (0 votes)

Questionnaire 2, Question 23 / 31

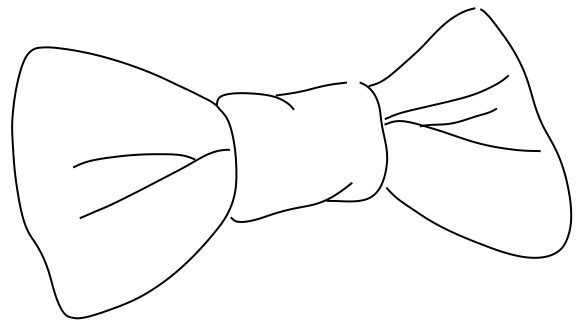
Which of the clean drawings below, B or C, more accurately depicts the rough drawing A on top? If both are equally accurate, please select "Both B and C". If neither, select "Neither B nor C".



A.



B. (Human - 0 votes)

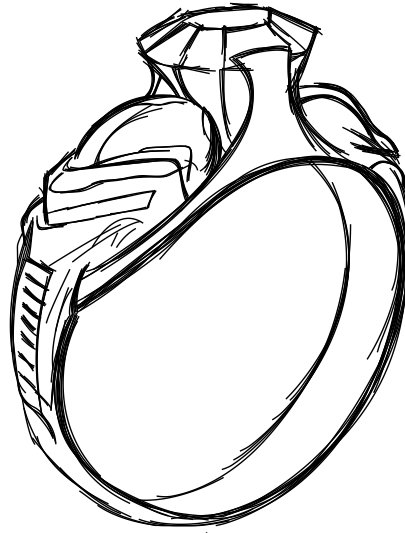


C. (Ours - 1 vote)

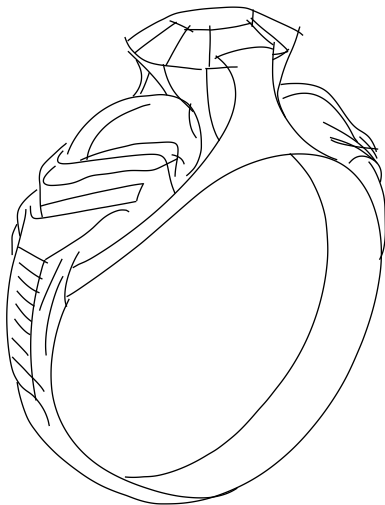
Both B and C (5 votes)

Neither B nor C (0 votes)

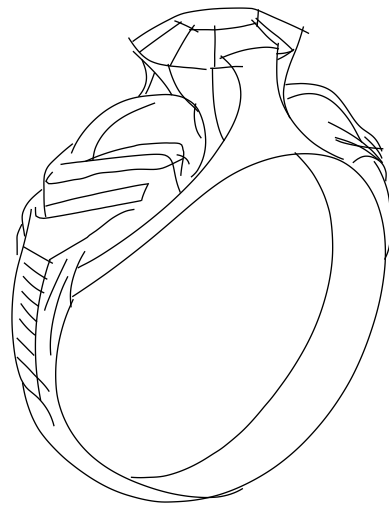
Which of the clean drawings below, B or C, more accurately depicts the rough drawing A on top? If both are equally accurate, please select "Both B and C". If neither, select "Neither B nor C".



A.



B. (Ours - 1 vote)




C. ([Liu et al. 2018] - 0 votes)

Both B and C (5 votes)


Neither B nor C (0 votes)

Questionnaire 2, Question 25 / 31


Which of the clean drawings below, B or C, more accurately depicts the rough drawing A on top? If both are equally accurate, please select "Both B and C". If neither, select "Neither B nor C".



A.



B. (Ours - 1 vote)

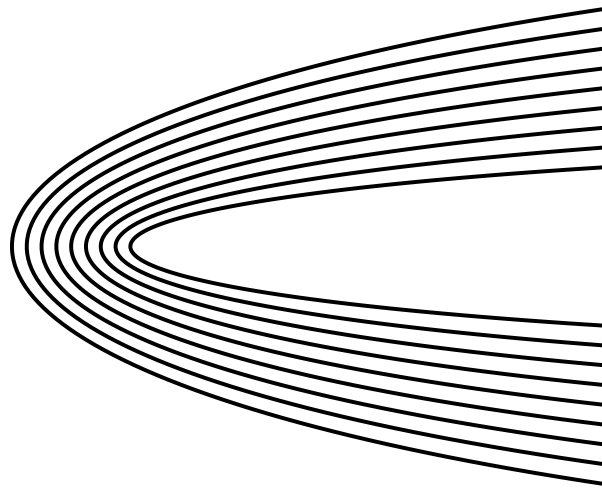


C. ([Orbay and Kara 2011] - 0 votes)

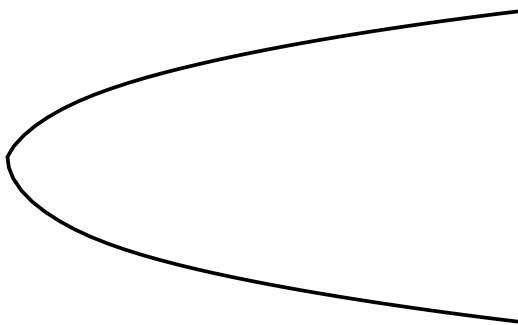
Both B and C (5 votes)

Neither B nor C (0 votes)

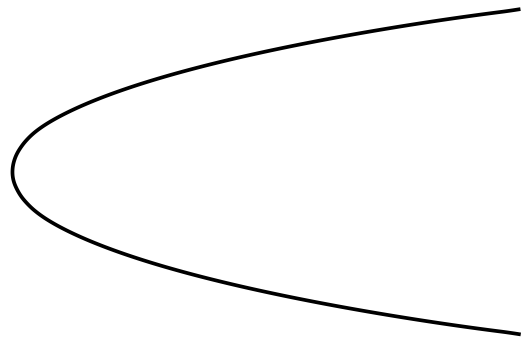
Which of the clean drawings below, B or C, more accurately depicts the rough drawing A on top? If both are equally accurate, please select "Both B and C". If neither, select "Neither B nor C".



A.



B. ([Liu et al. 2018] - 1 vote)



C. (Ours - 0 votes)


Both B and C (1 vote)

Neither B nor C (4 votes)


Which of the clean drawings below, B or C, more accurately depicts the rough drawing A on top? If both are equally accurate, please select "Both B and C". If neither, select "Neither B nor C".



A.



B. ([Orbay and Kara 2011] - 0 votes)




C. (Ours - 6 votes)

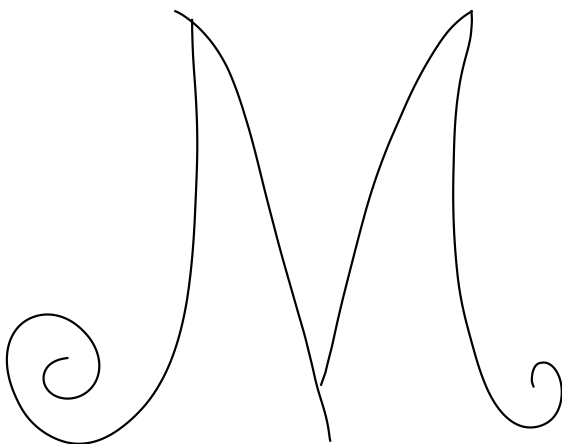
Both B and C (0 votes)

Neither B nor C (0 votes)

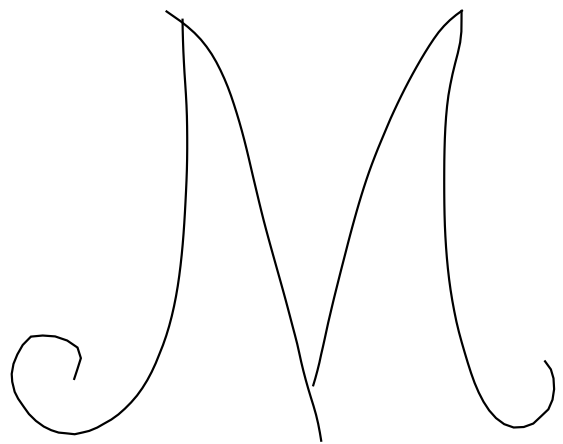
Which of the clean drawings below, B or C, more accurately depicts the rough drawing A on top? If both are equally accurate, please select "Both B and C". If neither, select "Neither B nor C".



A.



B. (Ours - 6 votes)




C. ([Liu et al. 2018] - 0 votes)

Both B and C (0 votes)


Neither B nor C (0 votes)

Questionnaire 2, Question 29 / 31


Which of the clean drawings below, B or C, more accurately depicts the rough drawing A on top? If both are equally accurate, please select "Both B and C". If neither, select "Neither B nor C".



A.



B. (Ours - 0 votes)



C. (Human - 3 votes)

Both B and C (3 votes)

Neither B nor C (0 votes)

Questionnaire 2, Question 30 / 31


Which of the clean drawings below, B or C, more accurately depicts the rough drawing A on top? If both are equally accurate, please select "Both B and C". If neither, select "Neither B nor C".



A.



B. ([Liu et al. 2018] - 0 votes)



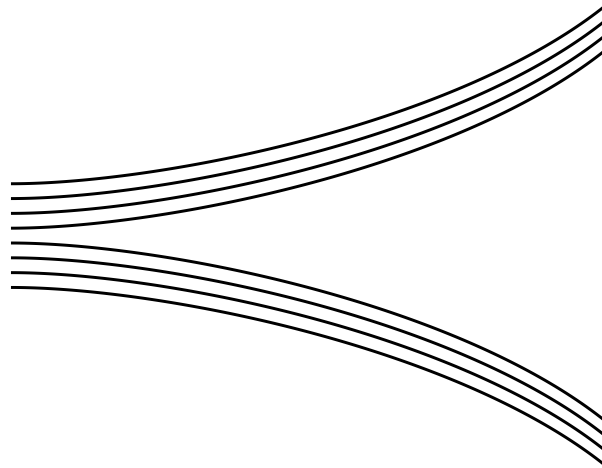
C. (Ours - 5 votes)

Both B and C (1 vote)

Neither B nor C (0 votes)

Questionnaire 2, Question 31 / 31

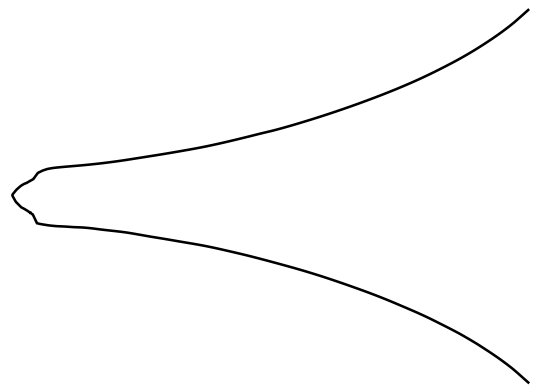
Which of the clean drawings below, B or C, more accurately depicts the rough drawing A on top? If both are equally accurate, please select "Both B and C". If neither, select "Neither B nor C".



A.



B. (Ours - 0 votes)



C. ([Orbay and Kara 2011] - 2 votes)

Both B and C (0 votes)

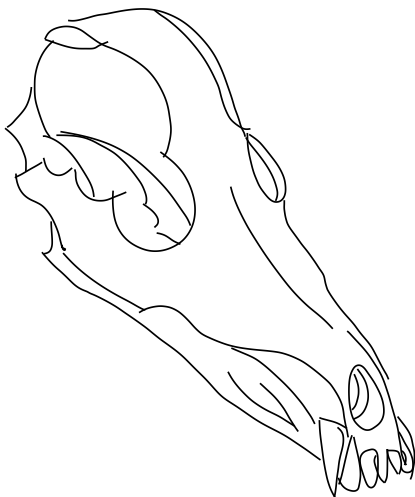
Neither B nor C (4 votes)

Questionnaire 3, Question 1 / 31

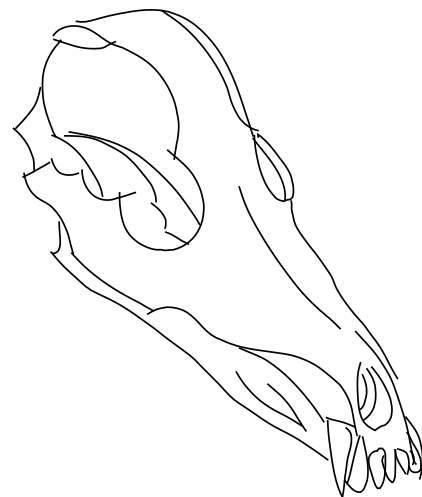
Which of the clean drawings below, B or C, more accurately depicts the rough drawing A on top? If both are equally accurate, please select "Both B and C". If neither, select "Neither B nor C".



A.



B. (Ours - 2 votes)



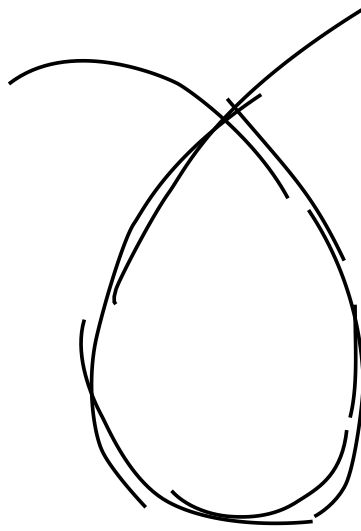
C. ([Liu et al. 2018] - 0 votes)

Both B and C (4 votes)

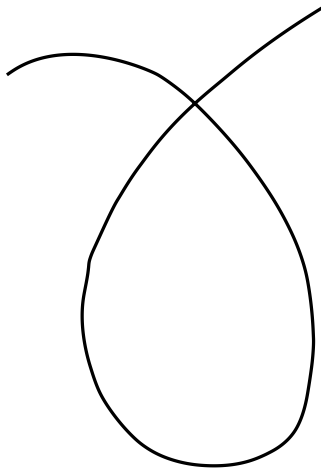
Neither B nor C (0 votes)

Questionnaire 3, Question 2 / 31

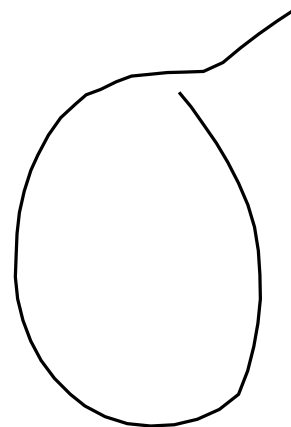
Which of the clean drawings below, B or C, more accurately depicts the rough drawing A on top? If both are equally accurate, please select "Both B and C". If neither, select "Neither B nor C".



A.



B. (Ours - 6 votes)



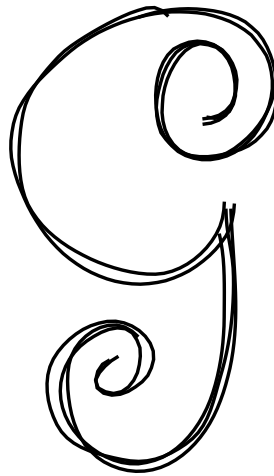
C. ([Liu et al. 2018] - 0 votes)

Both B and C (0 votes)


Neither B nor C (0 votes)

Questionnaire 3, Question 3 / 31


Which of the clean drawings below, B or C, more accurately depicts the rough drawing A on top? If both are equally accurate, please select "Both B and C". If neither, select "Neither B nor C".



A.



B. (Ours - 6 votes)




C. ([Orbay and Kara 2011] - 0 votes)

Both B and C (0 votes)


Neither B nor C (0 votes)

Questionnaire 3, Question 4 / 31


Which of the clean drawings below, B or C, more accurately depicts the rough drawing A on top? If both are equally accurate, please select "Both B and C". If neither, select "Neither B nor C".



A.



B. ([Orbay and Kara 2011] - 0 votes)




C. (Ours - 0 votes)

Both B and C (6 votes)


Neither B nor C (0 votes)

Questionnaire 3, Question 5 / 31


Which of the clean drawings below, B or C, more accurately depicts the rough drawing A on top? If both are equally accurate, please select "Both B and C". If neither, select "Neither B nor C".



A.



B. ([Orbay and Kara 2011] - 0 votes)



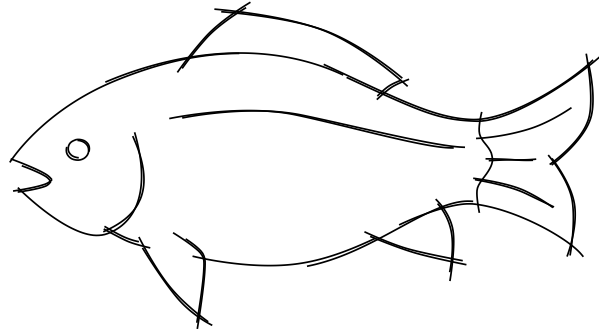
C. (Ours - 0 votes)

Both B and C (6 votes)

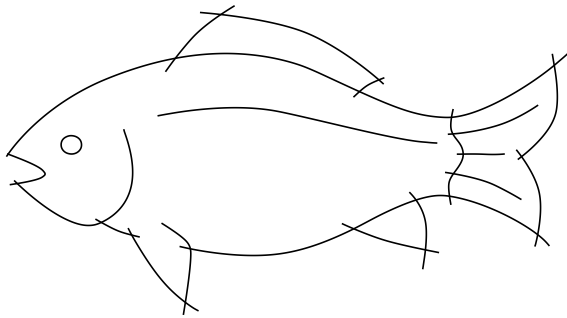
Neither B nor C (0 votes)

Questionnaire 3, Question 6 / 31

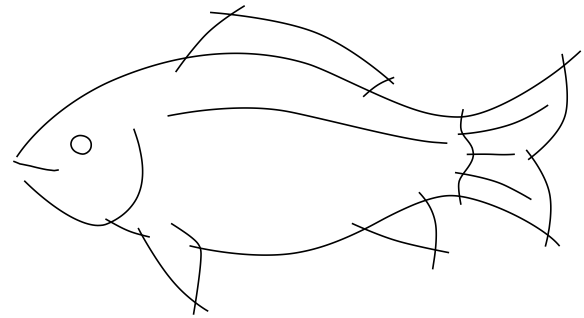
Which of the clean drawings below, B or C, more accurately depicts the rough drawing A on top? If both are equally accurate, please select "Both B and C". If neither, select "Neither B nor C".



A.



B. (Ours - 6 votes)




C. ([Liu et al. 2018] - 0 votes)

Both B and C (0 votes)

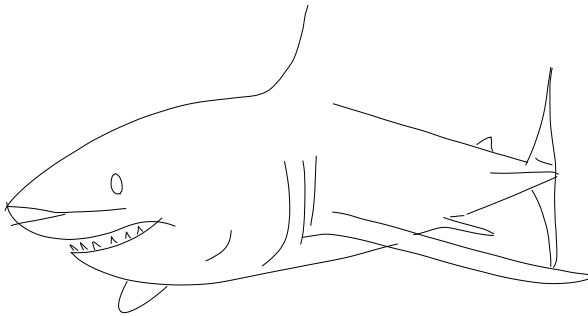
Neither B nor C (0 votes)

Questionnaire 3, Question 8 / 31


Which of the clean drawings below, B or C, more accurately depicts the rough drawing A on top? If both are equally accurate, please select "Both B and C". If neither, select "Neither B nor C".



A.



B. ([Liu et al. 2018] - 0 votes)




C. (Ours - 5 votes)

Both B and C (0 votes)


Neither B nor C (1 vote)

Questionnaire 3, Question 9 / 31

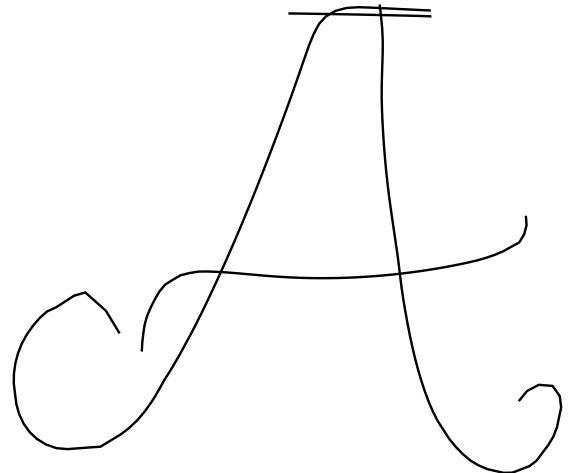
Which of the clean drawings below, B or C, more accurately depicts the rough drawing A on top? If both are equally accurate, please select "Both B and C". If neither, select "Neither B nor C".



A.



B. (Ours - 6 votes)



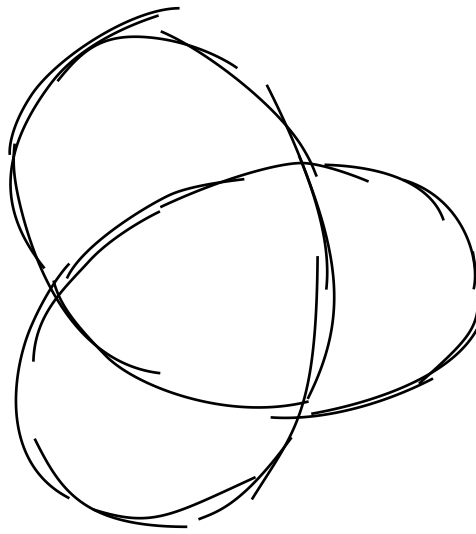
C. ([Liu et al. 2018] - 0 votes)

Both B and C (0 votes)

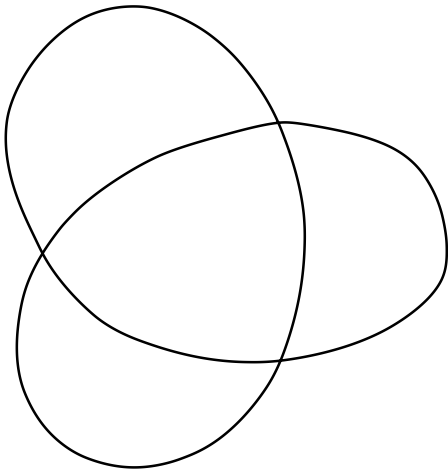
Neither B nor C (0 votes)

Questionnaire 3, Question 10 / 31

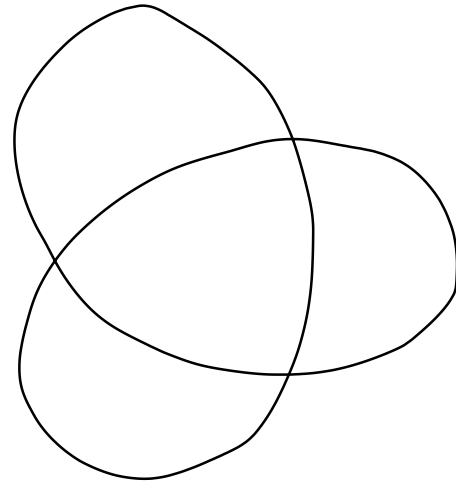
Which of the clean drawings below, B or C, more accurately depicts the rough drawing A on top? If both are equally accurate, please select "Both B and C". If neither, select "Neither B nor C".



A.



B. (Ours - 6 votes)




C. ([Orbay and Kara 2011] - 0 votes)

Both B and C (0 votes)


Neither B nor C (0 votes)

Questionnaire 3, Question 11 / 31


Which of the clean drawings below, B or C, more accurately depicts the rough drawing A on top? If both are equally accurate, please select "Both B and C". If neither, select "Neither B nor C".



A.



B. (Ours - 4 votes)



C. (Human - 2 votes)

Both B and C (0 votes)


Neither B nor C (0 votes)

Questionnaire 3, Question 12 / 31


Which of the clean drawings below, B or C, more accurately depicts the rough drawing A on top? If both are equally accurate, please select "Both B and C". If neither, select "Neither B nor C".



A.



B. (Ours - 6 votes)




C. ([Orbay and Kara 2011] - 0 votes)

Both B and C (0 votes)


Neither B nor C (0 votes)

Questionnaire 3, Question 13 / 31

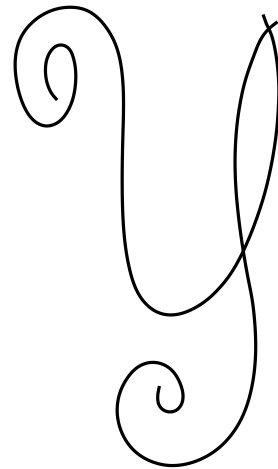
Which of the clean drawings below, B or C, more accurately depicts the rough drawing A on top? If both are equally accurate, please select "Both B and C". If neither, select "Neither B nor C".



A.



B. ([Orbay and Kara 2011] - 0 votes)




C. (Ours - 6 votes)

Both B and C (0 votes)


Neither B nor C (0 votes)

Questionnaire 3, Question 14 / 31


Which of the clean drawings below, B or C, more accurately depicts the rough drawing A on top? If both are equally accurate, please select "Both B and C". If neither, select "Neither B nor C".



A.



B. (Ours - 1 vote)




C. (Human - 3 votes)

Both B and C (2 votes)


Neither B nor C (0 votes)

Questionnaire 3, Question 15 / 31


Which of the clean drawings below, B or C, more accurately depicts the rough drawing A on top? If both are equally accurate, please select "Both B and C". If neither, select "Neither B nor C".



A.



B. (Ours - 6 votes)



C. ([Orbay and Kara 2011] - 0 votes)

Both B and C (0 votes)


Neither B nor C (0 votes)

Questionnaire 3, Question 16 / 31


Which of the clean drawings below, B or C, more accurately depicts the rough drawing A on top? If both are equally accurate, please select "Both B and C". If neither, select "Neither B nor C".



A.



B. (Ours - 0 votes)



C. (Human - 2 votes)

Both B and C (4 votes)

Neither B nor C (0 votes)

Questionnaire 3, Question 17 / 31


Which of the clean drawings below, B or C, more accurately depicts the rough drawing A on top? If both are equally accurate, please select "Both B and C". If neither, select "Neither B nor C".



A.



B. ([Orbay and Kara 2011] - 1 vote)



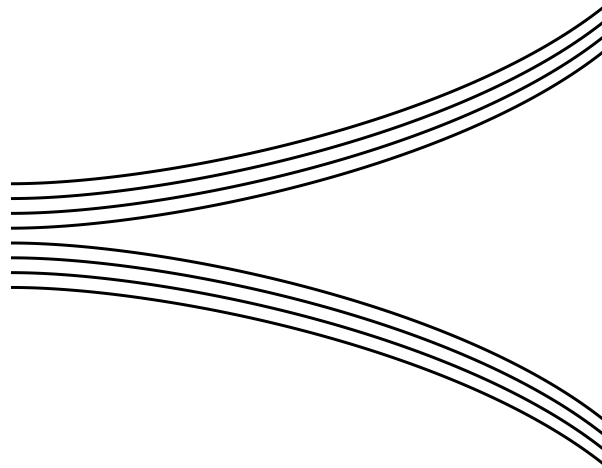
C. (Ours - 0 votes)

Both B and C (3 votes)

Neither B nor C (2 votes)

Questionnaire 3, Question 18 / 31

Which of the clean drawings below, B or C, more accurately depicts the rough drawing A on top? If both are equally accurate, please select "Both B and C". If neither, select "Neither B nor C".



A.



B. (Ours - 0 votes)




C. ([Liu et al. 2018] - 0 votes)

Both B and C (0 votes)

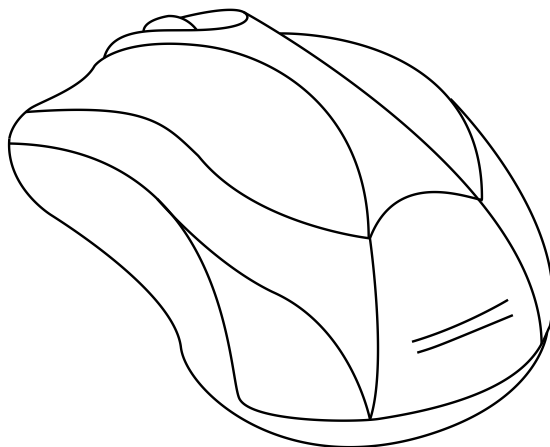
Neither B nor C (6 votes)

Questionnaire 3, Question 19 / 31

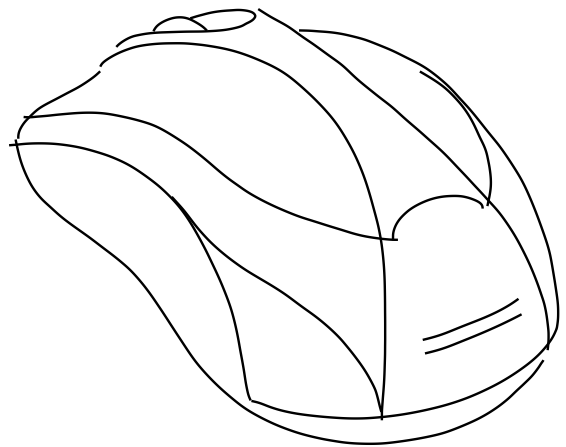
Which of the clean drawings below, B or C, more accurately depicts the rough drawing A on top? If both are equally accurate, please select "Both B and C". If neither, select "Neither B nor C".



A.



B. (Human - 3 votes)




C. (Ours - 3 votes)

Both B and C (0 votes)


Neither B nor C (0 votes)

Questionnaire 3, Question 20 / 31


Which of the clean drawings below, B or C, more accurately depicts the rough drawing A on top? If both are equally accurate, please select "Both B and C". If neither, select "Neither B nor C".



A.



B. (Ours - 2 votes)



C. (Human - 2 votes)

Both B and C (2 votes)


Neither B nor C (0 votes)

Questionnaire 3, Question 21 / 31


Which of the clean drawings below, B or C, more accurately depicts the rough drawing A on top? If both are equally accurate, please select "Both B and C". If neither, select "Neither B nor C".



A.



B. ([Orbay and Kara 2011] - 1 vote)



C. (Ours - 3 votes)

Both B and C (2 votes)


Neither B nor C (0 votes)

Questionnaire 3, Question 22 / 31


Which of the clean drawings below, B or C, more accurately depicts the rough drawing A on top? If both are equally accurate, please select "Both B and C". If neither, select "Neither B nor C".



A.



B. (Human - 2 votes)




C. (Ours - 2 votes)

Both B and C (2 votes)


Neither B nor C (0 votes)

Questionnaire 3, Question 23 / 31

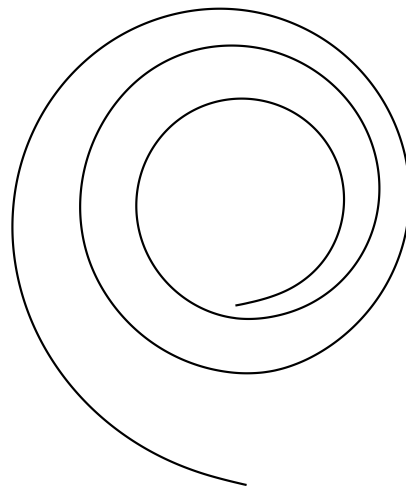
Which of the clean drawings below, B or C, more accurately depicts the rough drawing A on top? If both are equally accurate, please select "Both B and C". If neither, select "Neither B nor C".



A.



B. ([Orbay and Kara 2011] - 0 votes)



C. (Ours - 4 votes)

Both B and C (0 votes)

Neither B nor C (2 votes)

Which of the clean drawings below, B or C, more accurately depicts the rough drawing A on top? If both are equally accurate, please select "Both B and C". If neither, select "Neither B nor C".



A.



B. (Ours - 4 votes)



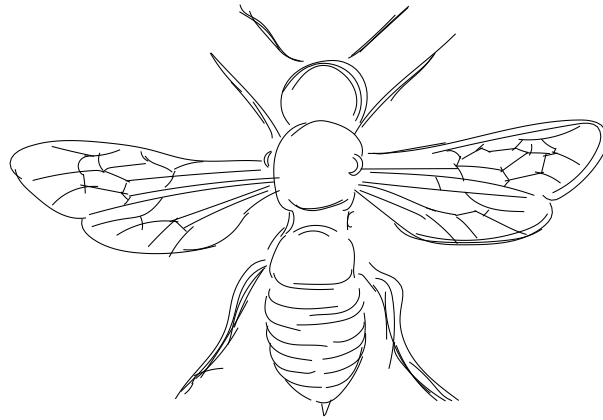
C. (Human - 1 vote)

Both B and C (1 vote)

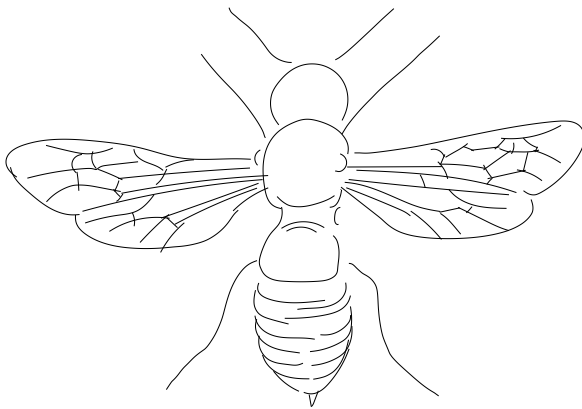
Neither B nor C (0 votes)

Questionnaire 3, Question 25 / 31

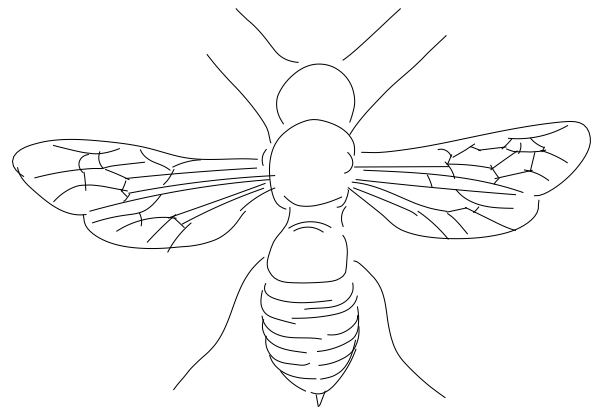
Which of the clean drawings below, B or C, more accurately depicts the rough drawing A on top? If both are equally accurate, please select "Both B and C". If neither, select "Neither B nor C".



A.



B. (Ours - 0 votes)




C. ([Liu et al. 2018] - 0 votes)


Both B and C (6 votes)

Neither B nor C (0 votes)


Which of the clean drawings below, B or C, more accurately depicts the rough drawing A on top? If both are equally accurate, please select "Both B and C". If neither, select "Neither B nor C".



A.



B. (Ours - 0 votes)



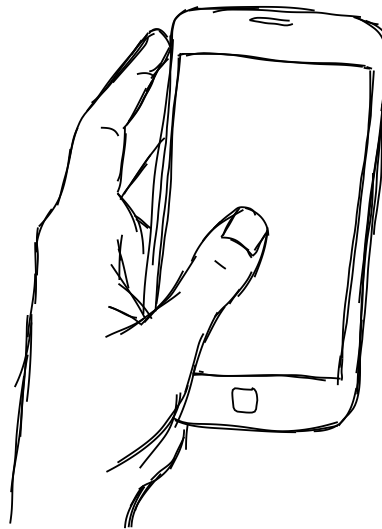
C. ([Liu et al. 2018] - 0 votes)

Both B and C (5 votes)

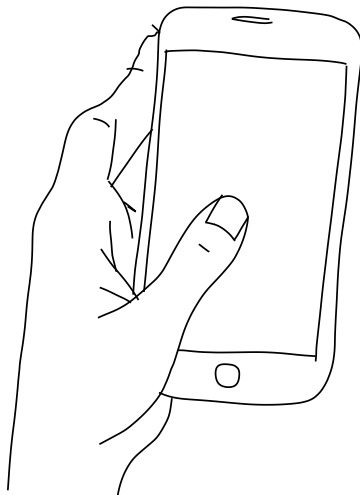
Neither B nor C (1 vote)

Questionnaire 3, Question 27 / 31

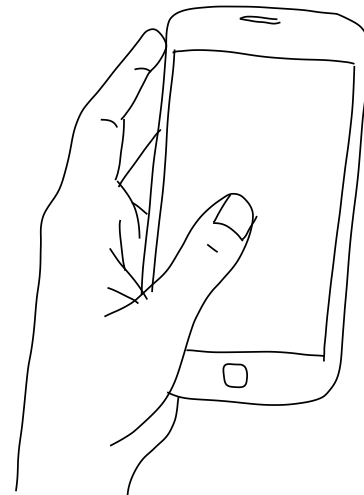
Which of the clean drawings below, B or C, more accurately depicts the rough drawing A on top? If both are equally accurate, please select "Both B and C". If neither, select "Neither B nor C".



A.



B. ([Orbay and Kara 2011] - 0 votes)



C. (Ours - 6 votes)

Both B and C (0 votes)

Neither B nor C (0 votes)

Questionnaire 3, Question 28 / 31

Which of the clean drawings below, B or C, more accurately depicts the rough drawing A on top? If both are equally accurate, please select "Both B and C". If neither, select "Neither B nor C".



A.



B. (Ours - 3 votes)




C. ([Liu et al. 2018] - 0 votes)

Both B and C (3 votes)

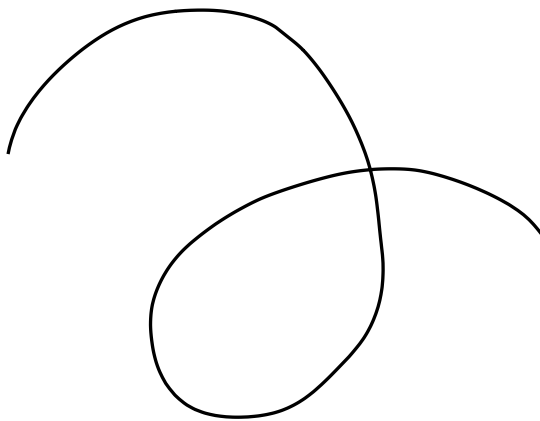
Neither B nor C (0 votes)

Questionnaire 3, Question 29 / 31

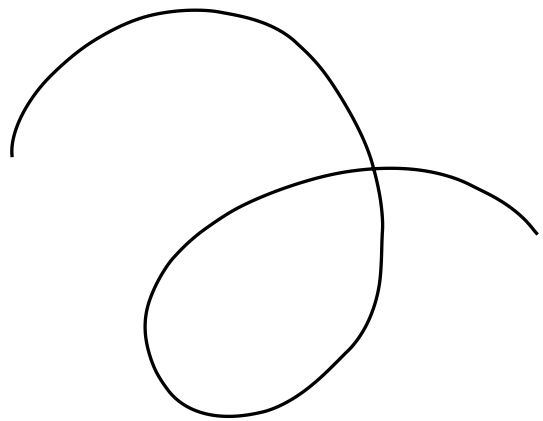
Which of the clean drawings below, B or C, more accurately depicts the rough drawing A on top? If both are equally accurate, please select "Both B and C". If neither, select "Neither B nor C".



A.



B. ([Orbay and Kara 2011] - 0 votes)




C. (Ours - 1 vote)


Both B and C (5 votes)

Neither B nor C (0 votes)


Which of the clean drawings below, B or C, more accurately depicts the rough drawing A on top? If both are equally accurate, please select "Both B and C". If neither, select "Neither B nor C".



A.



B. (Ours - 6 votes)




C. ([Liu et al. 2018] - 0 votes)

Both B and C (0 votes)


Neither B nor C (0 votes)

Questionnaire 3, Question 31 / 31


Which of the clean drawings below, B or C, more accurately depicts the rough drawing A on top? If both are equally accurate, please select "Both B and C". If neither, select "Neither B nor C".



A.



B. ([Liu et al. 2018] - 0 votes)




C. (Ours - 6 votes)

Both B and C (0 votes)


Neither B nor C (0 votes)

Questionnaire 4, Question 1 / 32


Which of the clean drawings below, B or C, more accurately depicts the rough drawing A on top? If both are equally accurate, please select "Both B and C". If neither, select "Neither B nor C".



A.



B. (Ours - 5 votes)




C. ([Orbay and Kara 2011] - 0 votes)

Both B and C (1 vote)

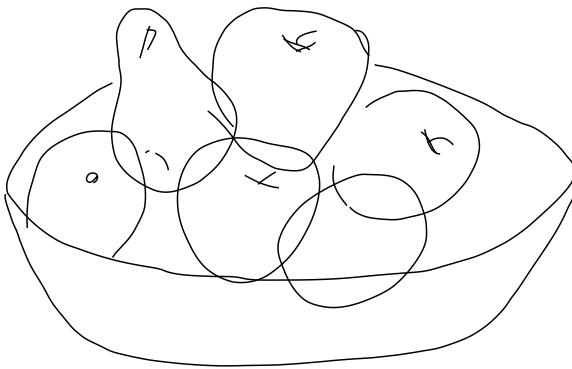
Neither B nor C (0 votes)

Questionnaire 4, Question 2 / 32

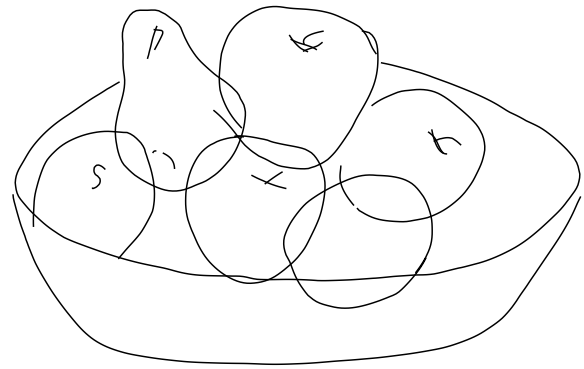
Which of the clean drawings below, B or C, more accurately depicts the rough drawing A on top? If both are equally accurate, please select "Both B and C". If neither, select "Neither B nor C".



A.



B. (Ours - 0 votes)




C. ([Liu et al. 2018] - 1 vote)

Both B and C (5 votes)

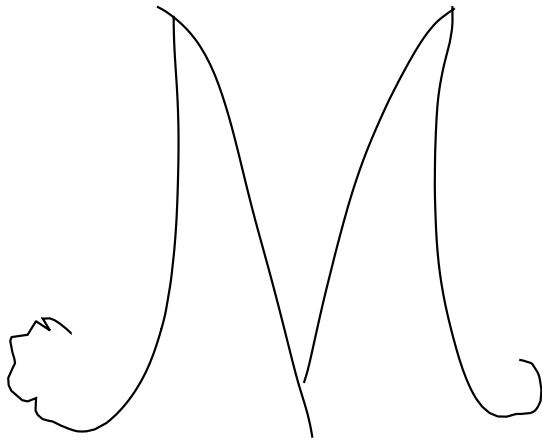
Neither B nor C (0 votes)

Questionnaire 4, Question 3 / 32

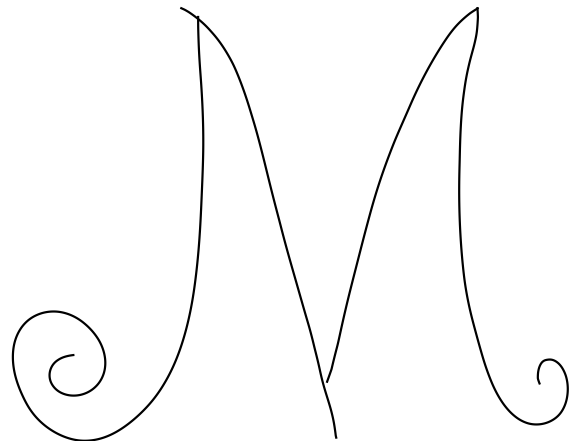
Which of the clean drawings below, B or C, more accurately depicts the rough drawing A on top? If both are equally accurate, please select "Both B and C". If neither, select "Neither B nor C".



A.



B. ([Orbay and Kara 2011] - 0 votes)



C. (Ours - 6 votes)

Both B and C (0 votes)


Neither B nor C (0 votes)

Questionnaire 4, Question 4 / 32


Which of the clean drawings below, B or C, more accurately depicts the rough drawing A on top? If both are equally accurate, please select "Both B and C". If neither, select "Neither B nor C".



A.



B. (Ours - 3 votes)



C. (Human - 3 votes)

Both B and C (0 votes)


Neither B nor C (0 votes)

Questionnaire 4, Question 5 / 32


Which of the clean drawings below, B or C, more accurately depicts the rough drawing A on top? If both are equally accurate, please select "Both B and C". If neither, select "Neither B nor C".



A.



B. ([Liu et al. 2018] - 0 votes)



C. (Ours - 3 votes)

Both B and C (3 votes)

Neither B nor C (0 votes)

Questionnaire 4, Question 6 / 32

Which of the clean drawings below, B or C, more accurately depicts the rough drawing A on top? If both are equally accurate, please select "Both B and C". If neither, select "Neither B nor C".



A.



B. ([Orbay and Kara 2011] - 1 vote)



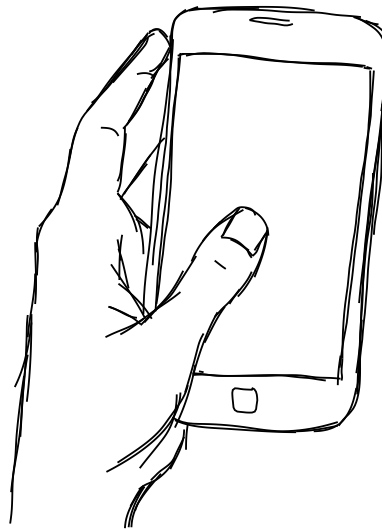
C. (Ours - 0 votes)

Both B and C (5 votes)

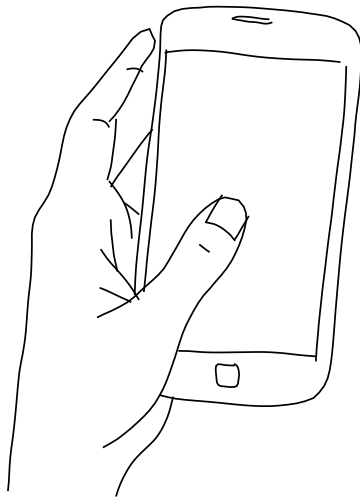
Neither B nor C (0 votes)

Questionnaire 4, Question 7 / 32

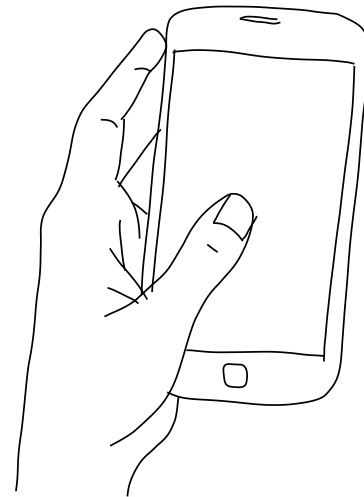
Which of the clean drawings below, B or C, more accurately depicts the rough drawing A on top? If both are equally accurate, please select "Both B and C". If neither, select "Neither B nor C".



A.



B. ([Liu et al. 2018] - 0 votes)



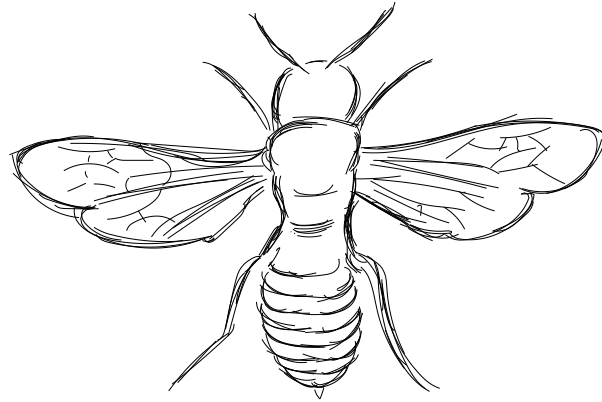
C. (Ours - 2 votes)

Both B and C (4 votes)

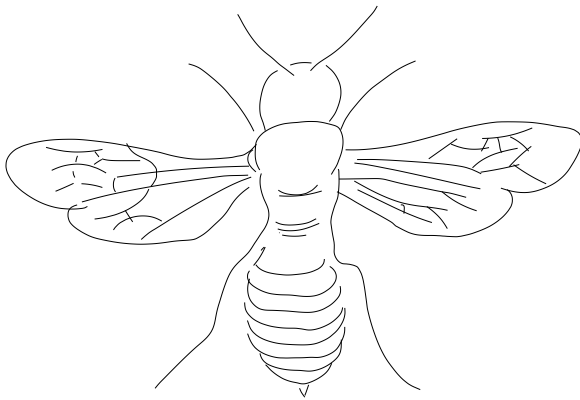
Neither B nor C (0 votes)

Questionnaire 4, Question 8 / 32

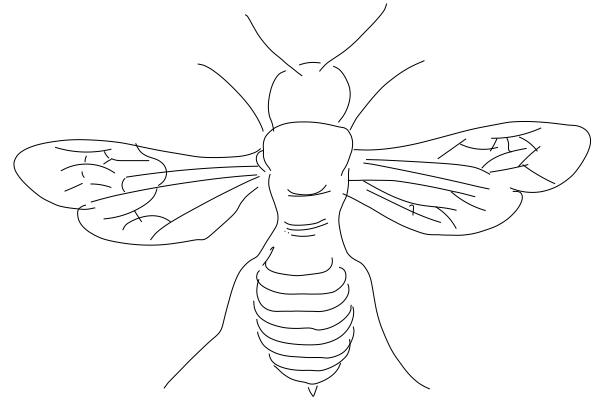
Which of the clean drawings below, B or C, more accurately depicts the rough drawing A on top? If both are equally accurate, please select "Both B and C". If neither, select "Neither B nor C".



A.



B. ([Orbay and Kara 2011] - 1 vote)




C. (Ours - 0 votes)

Both B and C (5 votes)


Neither B nor C (0 votes)

Questionnaire 4, Question 9 / 32


Which of the clean drawings below, B or C, more accurately depicts the rough drawing A on top? If both are equally accurate, please select "Both B and C". If neither, select "Neither B nor C".



A.



B. (Ours - 1 vote)




C. (Human - 2 votes)

Both B and C (3 votes)


Neither B nor C (0 votes)

Questionnaire 4, Question 10 / 32


Which of the clean drawings below, B or C, more accurately depicts the rough drawing A on top? If both are equally accurate, please select "Both B and C". If neither, select "Neither B nor C".



A.



B. (Ours - 0 votes)



C. ([Liu et al. 2018] - 1 vote)

Both B and C (4 votes)


Neither B nor C (1 vote)

Questionnaire 4, Question 11 / 32


Which of the clean drawings below, B or C, more accurately depicts the rough drawing A on top? If both are equally accurate, please select "Both B and C". If neither, select "Neither B nor C".



A.



B. (Ours - 5 votes)




C. ([Orbay and Kara 2011] - 0 votes)

Both B and C (1 vote)

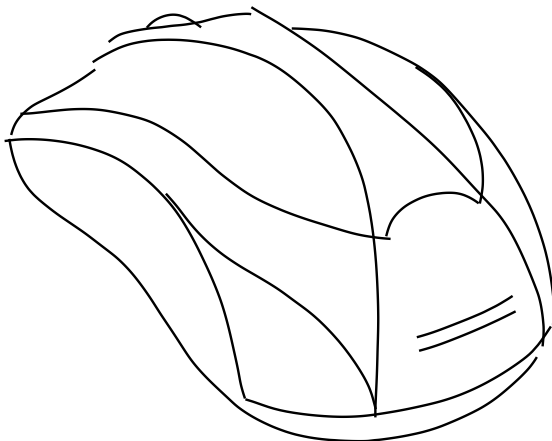
Neither B nor C (0 votes)

Questionnaire 4, Question 12 / 32

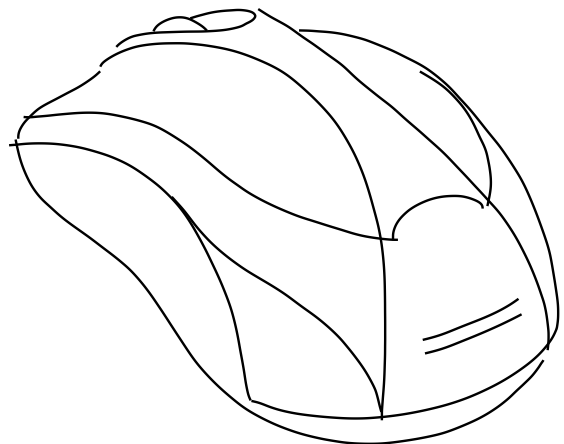
Which of the clean drawings below, B or C, more accurately depicts the rough drawing A on top? If both are equally accurate, please select "Both B and C". If neither, select "Neither B nor C".



A.



B. ([Orbay and Kara 2011] - 1 vote)



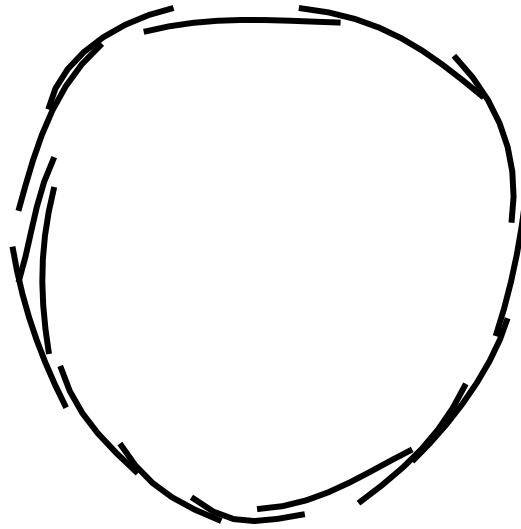
C. (Ours - 3 votes)

Both B and C (2 votes)


Neither B nor C (0 votes)

Questionnaire 4, Question 13 / 32


Which of the clean drawings below, B or C, more accurately depicts the rough drawing A on top? If both are equally accurate, please select "Both B and C". If neither, select "Neither B nor C".



A.



B. ([Liu et al. 2018] - 3 votes)




C. (Ours - 1 vote)

Both B and C (2 votes)


Neither B nor C (0 votes)

Questionnaire 4, Question 14 / 32


Which of the clean drawings below, B or C, more accurately depicts the rough drawing A on top? If both are equally accurate, please select "Both B and C". If neither, select "Neither B nor C".



A.



B. (Ours - 5 votes)




C. ([Liu et al. 2018] - 0 votes)

Both B and C (1 vote)


Neither B nor C (0 votes)

Questionnaire 4, Question 15 / 32


Which of the clean drawings below, B or C, more accurately depicts the rough drawing A on top? If both are equally accurate, please select "Both B and C". If neither, select "Neither B nor C".



A.



B. (Ours - 1 vote)



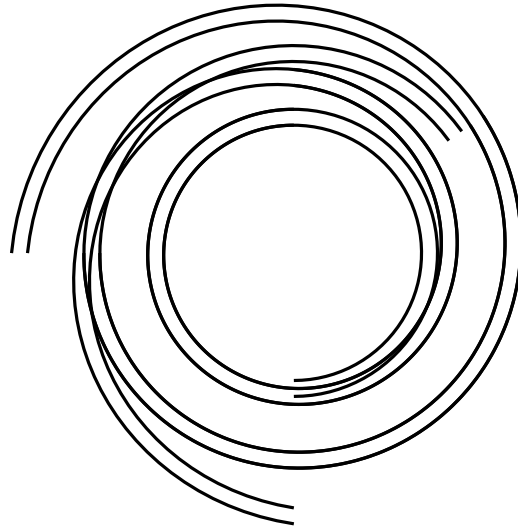
C. ([Orbay and Kara 2011] - 0 votes)

Both B and C (5 votes)


Neither B nor C (0 votes)

Questionnaire 4, Question 16 / 32

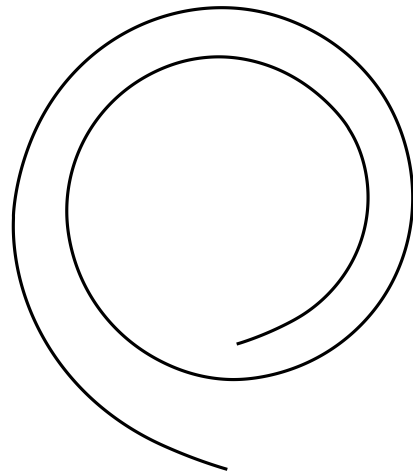
Which of the clean drawings below, B or C, more accurately depicts the rough drawing A on top? If both are equally accurate, please select "Both B and C". If neither, select "Neither B nor C".



A.



B. ([Orbay and Kara 2011] - 0 votes)




C. (Ours - 2 votes)


Both B and C (0 votes)

Neither B nor C (4 votes)


Which of the clean drawings below, B or C, more accurately depicts the rough drawing A on top? If both are equally accurate, please select "Both B and C". If neither, select "Neither B nor C".



A.



B. (Ours - 6 votes)



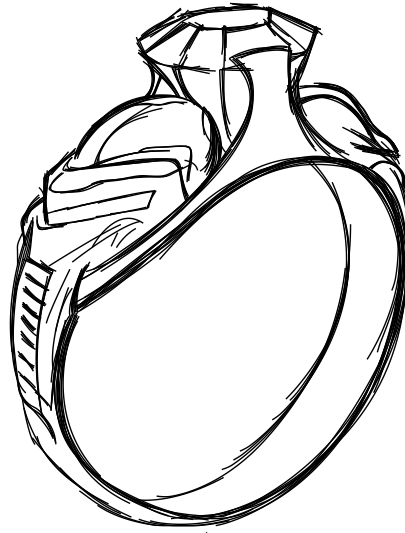
C. ([Liu et al. 2018] - 0 votes)

Both B and C (0 votes)

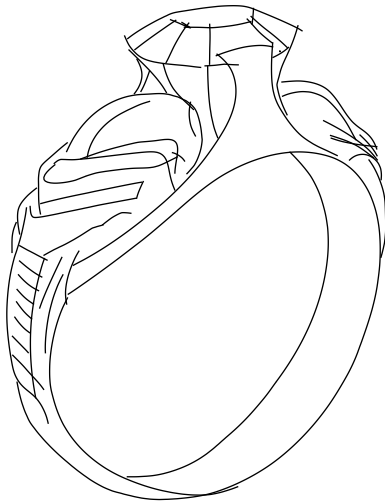
Neither B nor C (0 votes)

Questionnaire 4, Question 18 / 32

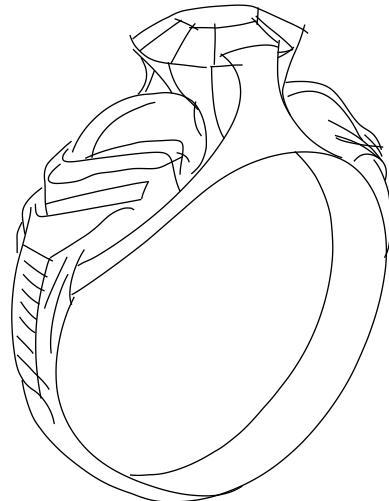
Which of the clean drawings below, B or C, more accurately depicts the rough drawing A on top? If both are equally accurate, please select "Both B and C". If neither, select "Neither B nor C".



A.



B. ([Orbay and Kara 2011] - 0 votes)




C. (Ours - 0 votes)

Both B and C (6 votes)


Neither B nor C (0 votes)

Questionnaire 4, Question 19 / 32


Which of the clean drawings below, B or C, more accurately depicts the rough drawing A on top? If both are equally accurate, please select "Both B and C". If neither, select "Neither B nor C".



A.



B. ([Orbay and Kara 2011] - 0 votes)



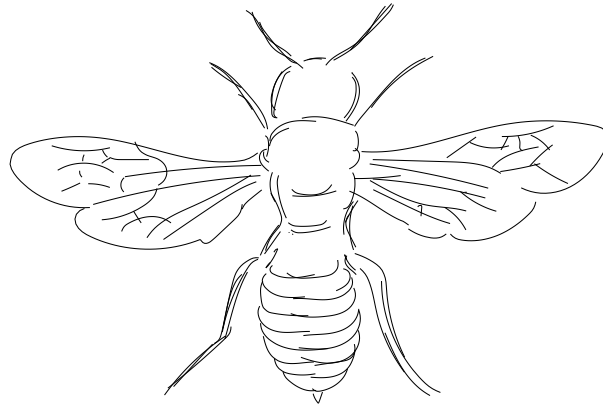
C. (Ours - 0 votes)

Both B and C (6 votes)

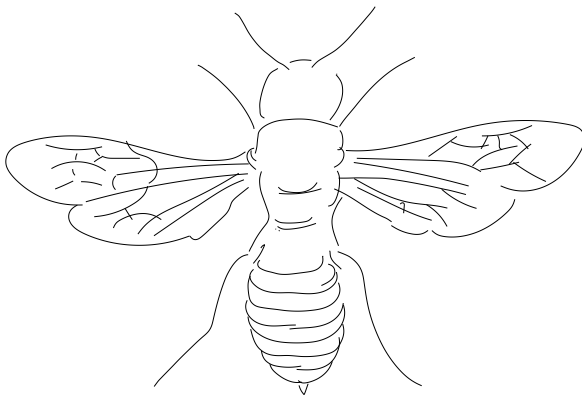
Neither B nor C (0 votes)

Questionnaire 4, Question 20 / 32

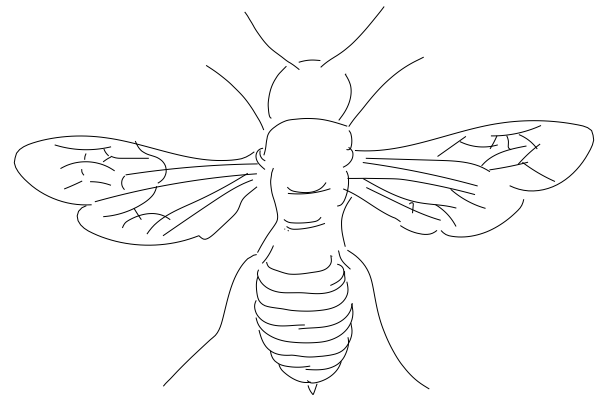
Which of the clean drawings below, B or C, more accurately depicts the rough drawing A on top? If both are equally accurate, please select "Both B and C". If neither, select "Neither B nor C".



A.



B. (Ours - 0 votes)




C. ([Liu et al. 2018] - 0 votes)

Both B and C (6 votes)


Neither B nor C (0 votes)

Questionnaire 4, Question 22 / 32


Which of the clean drawings below, B or C, more accurately depicts the rough drawing A on top? If both are equally accurate, please select "Both B and C". If neither, select "Neither B nor C".



A.



B. (Ours - 1 vote)




C. ([Liu et al. 2018] - 1 vote)

Both B and C (4 votes)


Neither B nor C (0 votes)

Questionnaire 4, Question 23 / 32


Which of the clean drawings below, B or C, more accurately depicts the rough drawing A on top? If both are equally accurate, please select "Both B and C". If neither, select "Neither B nor C".



A.



B. (Human - 3 votes)




C. (Ours - 0 votes)


Both B and C (3 votes)

Neither B nor C (0 votes)

Which of the clean drawings below, B or C, more accurately depicts the rough drawing A on top? If both are equally accurate, please select "Both B and C". If neither, select "Neither B nor C".



A.



B. (Ours - 6 votes)




C. ([Liu et al. 2018] - 0 votes)


Both B and C (0 votes)

Neither B nor C (0 votes)


Which of the clean drawings below, B or C, more accurately depicts the rough drawing A on top? If both are equally accurate, please select "Both B and C". If neither, select "Neither B nor C".



A.



B. (Ours - 6 votes)




C. ([Liu et al. 2018] - 0 votes)

Both B and C (0 votes)


Neither B nor C (0 votes)

Questionnaire 4, Question 26 / 32

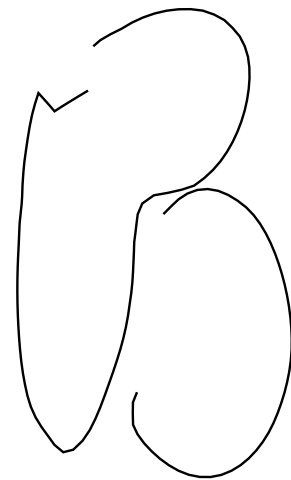
Which of the clean drawings below, B or C, more accurately depicts the rough drawing A on top? If both are equally accurate, please select "Both B and C". If neither, select "Neither B nor C".



A.



B. (Ours - 6 votes)




C. ([Liu et al. 2018] - 0 votes)

Both B and C (0 votes)


Neither B nor C (0 votes)

Questionnaire 4, Question 27 / 32


Which of the clean drawings below, B or C, more accurately depicts the rough drawing A on top? If both are equally accurate, please select "Both B and C". If neither, select "Neither B nor C".



A.



B. (Ours - 2 votes)




C. ([Liu et al. 2018] - 0 votes)

Both B and C (4 votes)


Neither B nor C (0 votes)

Questionnaire 4, Question 28 / 32


Which of the clean drawings below, B or C, more accurately depicts the rough drawing A on top? If both are equally accurate, please select "Both B and C". If neither, select "Neither B nor C".



A.



B. ([Orbay and Kara 2011] - 0 votes)




C. (Ours - 6 votes)

Both B and C (0 votes)


Neither B nor C (0 votes)

Questionnaire 4, Question 29 / 32


Which of the clean drawings below, B or C, more accurately depicts the rough drawing A on top? If both are equally accurate, please select "Both B and C". If neither, select "Neither B nor C".



A.



B. (Ours - 2 votes)




C. ([Liu et al. 2018] - 0 votes)

Both B and C (4 votes)

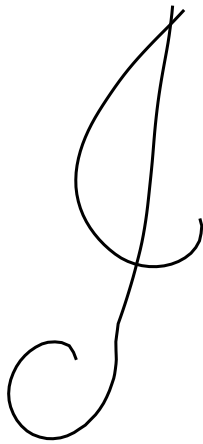
Neither B nor C (0 votes)

Questionnaire 4, Question 30 / 32


Which of the clean drawings below, B or C, more accurately depicts the rough drawing A on top? If both are equally accurate, please select "Both B and C". If neither, select "Neither B nor C".



A.



B. ([Liu et al. 2018] - 0 votes)



C. (Ours - 6 votes)

Both B and C (0 votes)


Neither B nor C (0 votes)

Questionnaire 4, Question 31 / 32


Which of the clean drawings below, B or C, more accurately depicts the rough drawing A on top? If both are equally accurate, please select "Both B and C". If neither, select "Neither B nor C".



A.



B. ([Orbay and Kara 2011] - 0 votes)




C. (Ours - 5 votes)

Both B and C (1 vote)


Neither B nor C (0 votes)

Questionnaire 4, Question 32 / 32

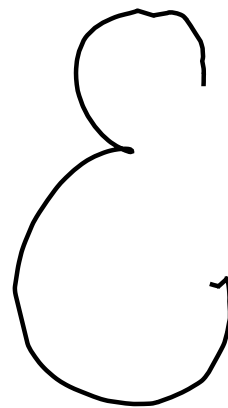
Which of the clean drawings below, B or C, more accurately depicts the rough drawing A on top? If both are equally accurate, please select "Both B and C". If neither, select "Neither B nor C".



A.



B. (Ours - 6 votes)



C. ([Orbay and Kara 2011] - 0 votes)

Both B and C (0 votes)


Neither B nor C (0 votes)

Questionnaire 5, Question 1 / 32


Which of the clean drawings below, B or C, more accurately depicts the rough drawing A on top? If both are equally accurate, please select "Both B and C". If neither, select "Neither B nor C".



A.



B. (Ours - 6 votes)



C. ([Liu et al. 2018] - 0 votes)

Both B and C (0 votes)


Neither B nor C (0 votes)

Questionnaire 5, Question 2 / 32


Which of the clean drawings below, B or C, more accurately depicts the rough drawing A on top? If both are equally accurate, please select "Both B and C". If neither, select "Neither B nor C".



A.



B. ([Orbay and Kara 2011] - 0 votes)




C. (Ours - 5 votes)

Both B and C (1 vote)

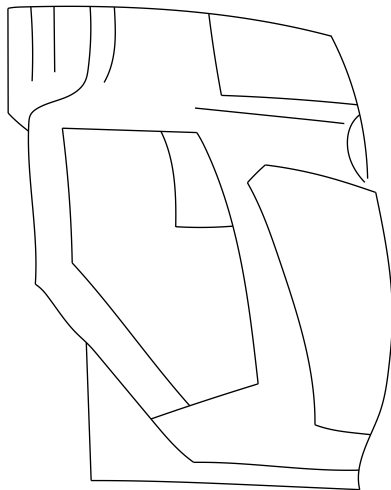
Neither B nor C (0 votes)

Questionnaire 5, Question 3 / 32


Which of the clean drawings below, B or C, more accurately depicts the rough drawing A on top? If both are equally accurate, please select "Both B and C". If neither, select "Neither B nor C".



A.



B. (Human - 3 votes)



C. (Ours - 2 votes)

Both B and C (1 vote)


Neither B nor C (0 votes)

Questionnaire 5, Question 5 / 32


Which of the clean drawings below, B or C, more accurately depicts the rough drawing A on top? If both are equally accurate, please select "Both B and C". If neither, select "Neither B nor C".



A.



B. ([Orbay and Kara 2011] - 0 votes)




C. (Ours - 6 votes)

Both B and C (0 votes)


Neither B nor C (0 votes)

Questionnaire 5, Question 6 / 32


Which of the clean drawings below, B or C, more accurately depicts the rough drawing A on top? If both are equally accurate, please select "Both B and C". If neither, select "Neither B nor C".



A.



B. (Ours - 5 votes)




C. ([Liu et al. 2018] - 0 votes)

Both B and C (1 vote)


Neither B nor C (0 votes)

Questionnaire 5, Question 7 / 32


Which of the clean drawings below, B or C, more accurately depicts the rough drawing A on top? If both are equally accurate, please select "Both B and C". If neither, select "Neither B nor C".



A.



B. (Ours - 6 votes)




C. ([Orbay and Kara 2011] - 0 votes)

Both B and C (0 votes)

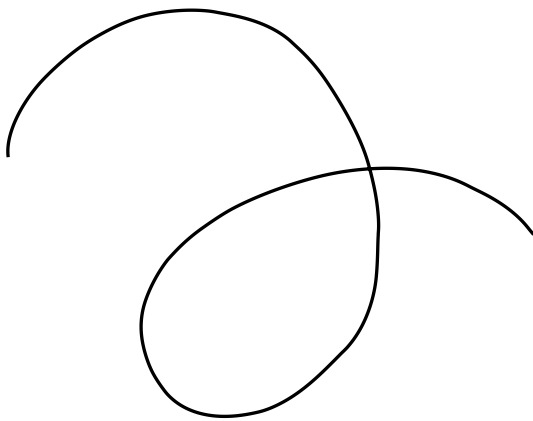
Neither B nor C (0 votes)

Questionnaire 5, Question 8 / 32


Which of the clean drawings below, B or C, more accurately depicts the rough drawing A on top? If both are equally accurate, please select "Both B and C". If neither, select "Neither B nor C".



A.



B. (Ours - 6 votes)




C. ([Liu et al. 2018] - 0 votes)

Both B and C (0 votes)


Neither B nor C (0 votes)

Questionnaire 5, Question 9 / 32


Which of the clean drawings below, B or C, more accurately depicts the rough drawing A on top? If both are equally accurate, please select "Both B and C". If neither, select "Neither B nor C".



A.



B. (Ours - 6 votes)



C. ([Orbay and Kara 2011] - 0 votes)

Both B and C (0 votes)


Neither B nor C (0 votes)

Questionnaire 5, Question 10 / 32


Which of the clean drawings below, B or C, more accurately depicts the rough drawing A on top? If both are equally accurate, please select "Both B and C". If neither, select "Neither B nor C".



A.



B. (Ours - 4 votes)



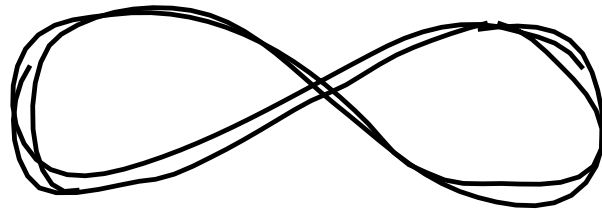
C. ([Orbay and Kara 2011] - 1 vote)

Both B and C (0 votes)


Neither B nor C (1 vote)

Questionnaire 5, Question 11 / 32

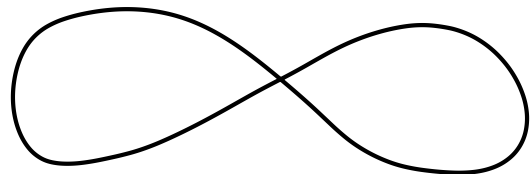
Which of the clean drawings below, B or C, more accurately depicts the rough drawing A on top? If both are equally accurate, please select "Both B and C". If neither, select "Neither B nor C".



A.



B. ([Liu et al. 2018] - 0 votes)



C. (Ours - 6 votes)

Both B and C (0 votes)


Neither B nor C (0 votes)

Questionnaire 5, Question 12 / 32


Which of the clean drawings below, B or C, more accurately depicts the rough drawing A on top? If both are equally accurate, please select "Both B and C". If neither, select "Neither B nor C".



A.



B. ([Orbay and Kara 2011] - 0 votes)



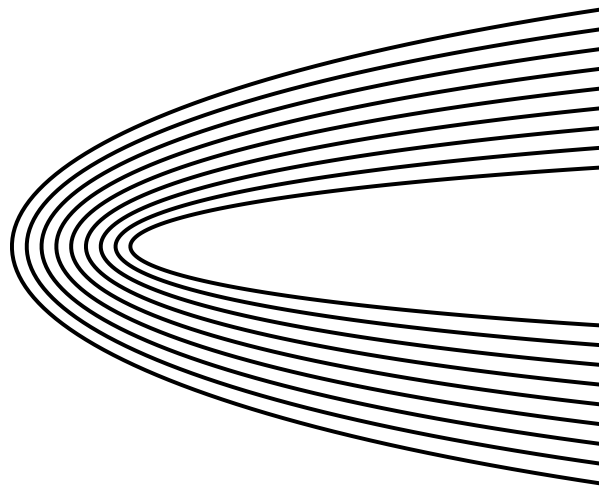
C. (Ours - 4 votes)

Both B and C (2 votes)

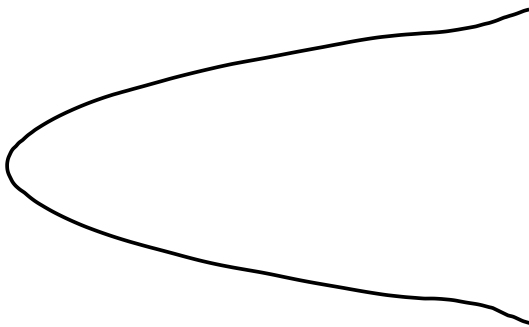
Neither B nor C (0 votes)

Questionnaire 5, Question 13 / 32

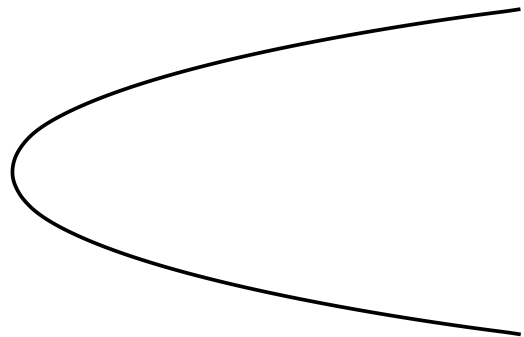
Which of the clean drawings below, B or C, more accurately depicts the rough drawing A on top? If both are equally accurate, please select "Both B and C". If neither, select "Neither B nor C".



A.



B. ([Orbay and Kara 2011] - 0 votes)




C. (Ours - 4 votes)

Both B and C (0 votes)


Neither B nor C (2 votes)

Questionnaire 5, Question 14 / 32


Which of the clean drawings below, B or C, more accurately depicts the rough drawing A on top? If both are equally accurate, please select "Both B and C". If neither, select "Neither B nor C".



A.



B. (Ours - 2 votes)



C. (Human - 2 votes)

Both B and C (2 votes)


Neither B nor C (0 votes)

Questionnaire 5, Question 15 / 32


Which of the clean drawings below, B or C, more accurately depicts the rough drawing A on top? If both are equally accurate, please select "Both B and C". If neither, select "Neither B nor C".



A.



B. (Ours - 4 votes)



C. ([Liu et al. 2018] - 0 votes)

Both B and C (1 vote)

Neither B nor C (1 vote)

Questionnaire 5, Question 16 / 32

Which of the clean drawings below, B or C, more accurately depicts the rough drawing A on top? If both are equally accurate, please select "Both B and C". If neither, select "Neither B nor C".



A.



B. ([Orbay and Kara 2011] - 0 votes)




C. (Ours - 1 vote)

Both B and C (5 votes)

Neither B nor C (0 votes)

Questionnaire 5, Question 17 / 32


Which of the clean drawings below, B or C, more accurately depicts the rough drawing A on top? If both are equally accurate, please select "Both B and C". If neither, select "Neither B nor C".



A.



B. ([Liu et al. 2018] - 0 votes)




C. (Ours - 5 votes)

Both B and C (1 vote)


Neither B nor C (0 votes)

Questionnaire 5, Question 18 / 32


Which of the clean drawings below, B or C, more accurately depicts the rough drawing A on top? If both are equally accurate, please select "Both B and C". If neither, select "Neither B nor C".



A.



B. ([Orbay and Kara 2011] - 1 vote)



C. (Ours - 2 votes)

Both B and C (3 votes)

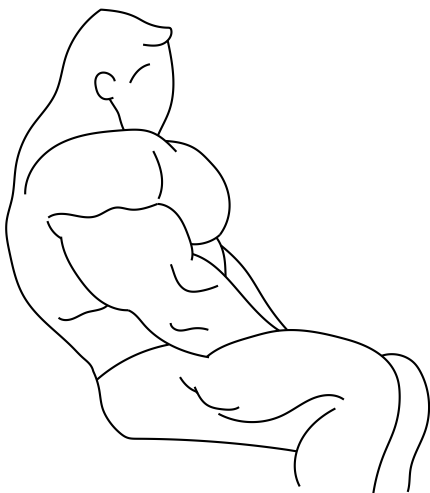
Neither B nor C (0 votes)

Questionnaire 5, Question 19 / 32

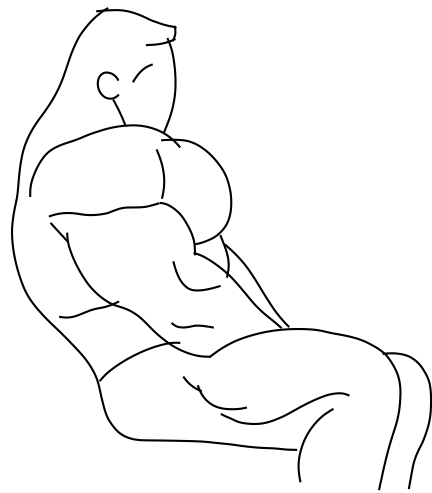
Which of the clean drawings below, B or C, more accurately depicts the rough drawing A on top? If both are equally accurate, please select "Both B and C". If neither, select "Neither B nor C".



A.



B. (Human - 2 votes)




C. (Ours - 2 votes)


Both B and C (2 votes)

Neither B nor C (0 votes)


Which of the clean drawings below, B or C, more accurately depicts the rough drawing A on top? If both are equally accurate, please select "Both B and C". If neither, select "Neither B nor C".



A.



B. ([Liu et al. 2018] - 0 votes)




C. (Ours - 6 votes)

Both B and C (0 votes)


Neither B nor C (0 votes)

Questionnaire 5, Question 21 / 32


Which of the clean drawings below, B or C, more accurately depicts the rough drawing A on top? If both are equally accurate, please select "Both B and C". If neither, select "Neither B nor C".



A.



B. ([Orbay and Kara 2011] - 0 votes)



C. (Ours - 6 votes)

Both B and C (0 votes)

Neither B nor C (0 votes)

Questionnaire 5, Question 22 / 32

Which of the clean drawings below, B or C, more accurately depicts the rough drawing A on top? If both are equally accurate, please select "Both B and C". If neither, select "Neither B nor C".



A.



B. (Ours - 5 votes)




C. ([Orbay and Kara 2011] - 0 votes)


Both B and C (1 vote)

Neither B nor C (0 votes)


Which of the clean drawings below, B or C, more accurately depicts the rough drawing A on top? If both are equally accurate, please select "Both B and C". If neither, select "Neither B nor C".



A.



B. ([Liu et al. 2018] - 0 votes)



C. (Ours - 6 votes)

Both B and C (0 votes)


Neither B nor C (0 votes)

Questionnaire 5, Question 24 / 32

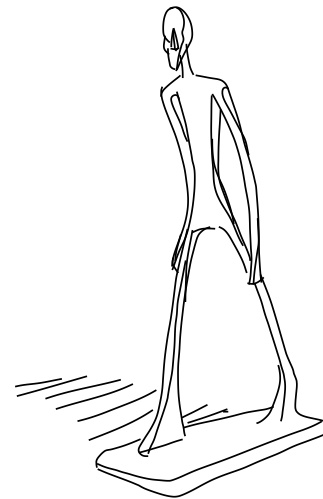
Which of the clean drawings below, B or C, more accurately depicts the rough drawing A on top? If both are equally accurate, please select "Both B and C". If neither, select "Neither B nor C".



A.



B. ([Orbay and Kara 2011] - 0 votes)



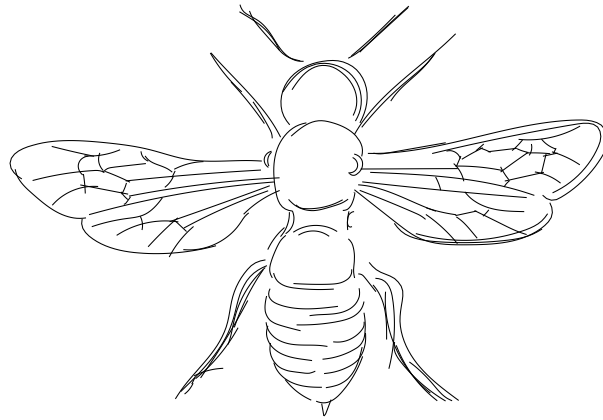
C. (Ours - 2 votes)

Both B and C (4 votes)

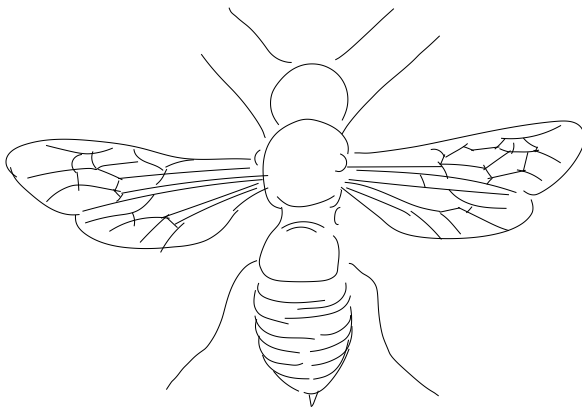
Neither B nor C (0 votes)

Questionnaire 5, Question 25 / 32

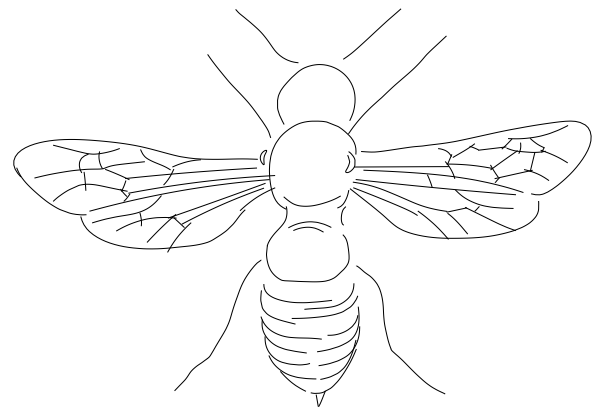
Which of the clean drawings below, B or C, more accurately depicts the rough drawing A on top? If both are equally accurate, please select "Both B and C". If neither, select "Neither B nor C".



A.



B. (Ours - 0 votes)




C. ([Orbay and Kara 2011] - 3 votes)

Both B and C (3 votes)


Neither B nor C (0 votes)

Questionnaire 5, Question 26 / 32

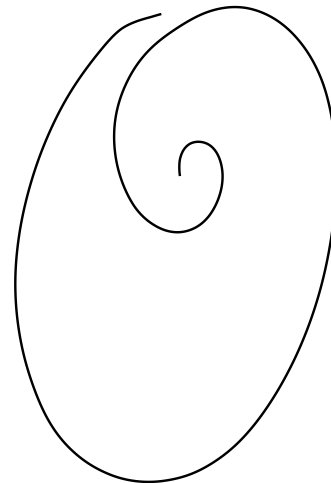
Which of the clean drawings below, B or C, more accurately depicts the rough drawing A on top? If both are equally accurate, please select "Both B and C". If neither, select "Neither B nor C".



A.



B. ([Liu et al. 2018] - 0 votes)



C. (Ours - 6 votes)

Both B and C (0 votes)


Neither B nor C (0 votes)

Questionnaire 5, Question 27 / 32


Which of the clean drawings below, B or C, more accurately depicts the rough drawing A on top? If both are equally accurate, please select "Both B and C". If neither, select "Neither B nor C".



A.



B. (Ours - 0 votes)



C. ([Orbay and Kara 2011] - 0 votes)

Both B and C (6 votes)

Neither B nor C (0 votes)

Which of the clean drawings below, B or C, more accurately depicts the rough drawing A on top? If both are equally accurate, please select "Both B and C". If neither, select "Neither B nor C".



A.



B. (Human - 1 vote)

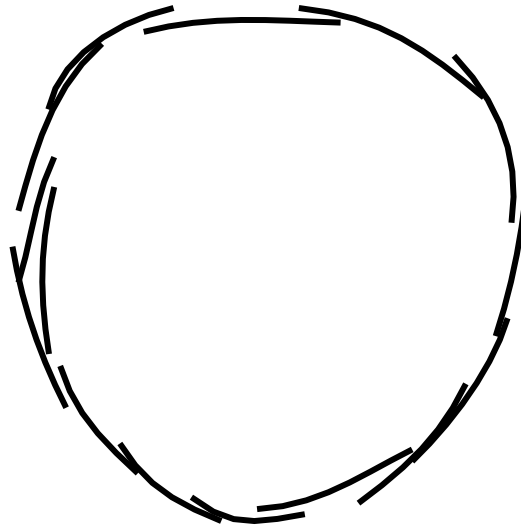


C. (Ours - 1 vote)


Both B and C (4 votes)

Neither B nor C (0 votes)


Which of the clean drawings below, B or C, more accurately depicts the rough drawing A on top? If both are equally accurate, please select "Both B and C". If neither, select "Neither B nor C".



A.



B. (Ours - 0 votes)



C. ([Orbay and Kara 2011] - 1 vote)

Both B and C (3 votes)


Neither B nor C (2 votes)

Questionnaire 5, Question 30 / 32

Which of the clean drawings below, B or C, more accurately depicts the rough drawing A on top? If both are equally accurate, please select "Both B and C". If neither, select "Neither B nor C".

A rough, hand-drawn cursive word "sigggraph". The letters are somewhat messy and overlapping. The 's' has a small dot above it. The 'g's are connected, and the 'r' and 'a' are also connected. The 'p' has a long, thin tail.

A.

A clean, smooth cursive drawing of the word "siggraph". The letters are well-defined and clearly separated. The 's' has a small dot above it. The 'g's are connected, and the 'r' and 'a' are also connected. The 'p' has a long, thin tail.

B. ([Liu et al. 2018] - 0 votes)

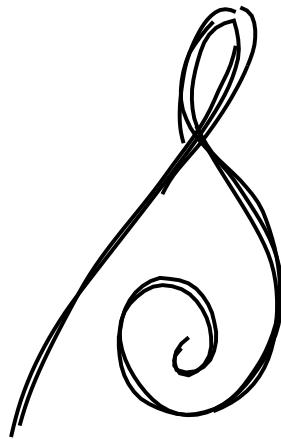
C. (Ours - 6 votes)

Both B and C (0 votes)

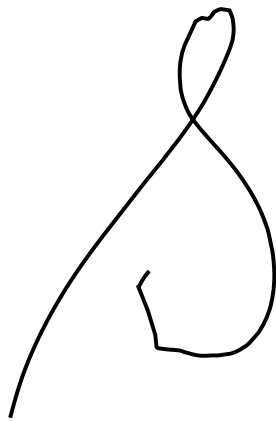
Neither B nor C (0 votes)

Questionnaire 5, Question 31 / 32


Which of the clean drawings below, B or C, more accurately depicts the rough drawing A on top? If both are equally accurate, please select "Both B and C". If neither, select "Neither B nor C".



A.



B. ([Orbay and Kara 2011] - 0 votes)




C. (Ours - 6 votes)

Both B and C (0 votes)

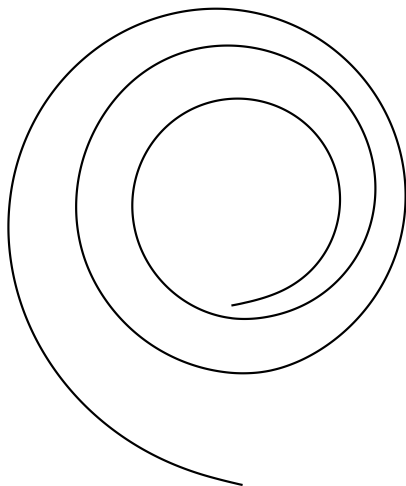
Neither B nor C (0 votes)

Questionnaire 5, Question 32 / 32


Which of the clean drawings below, B or C, more accurately depicts the rough drawing A on top? If both are equally accurate, please select "Both B and C". If neither, select "Neither B nor C".



A.



B. (Ours - 3 votes)



C. ([Liu et al. 2018] - 1 vote)

Both B and C (0 votes)


Neither B nor C (2 votes)

Questionnaire 6, Question 1 / 31

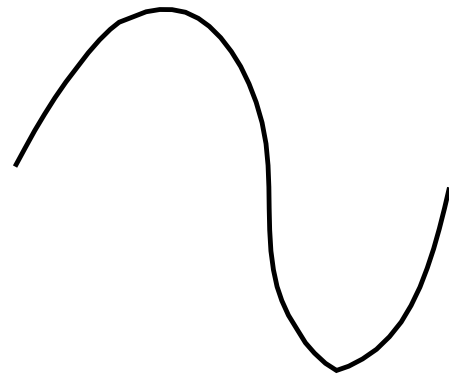
Which of the clean drawings below, B or C, more accurately depicts the rough drawing A on top? If both are equally accurate, please select "Both B and C". If neither, select "Neither B nor C".



A.



B. (Ours - 5 votes)



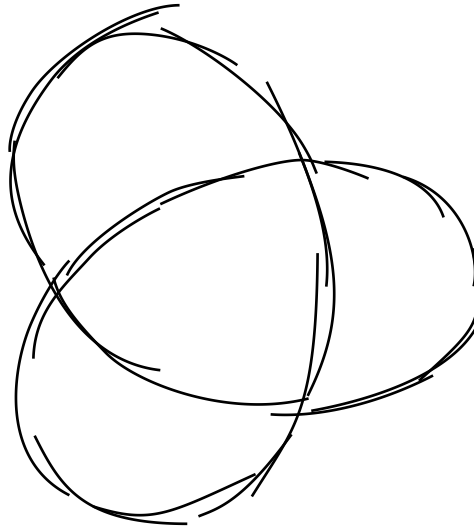
C. ([Liu et al. 2018] - 0 votes)

Both B and C (0 votes)

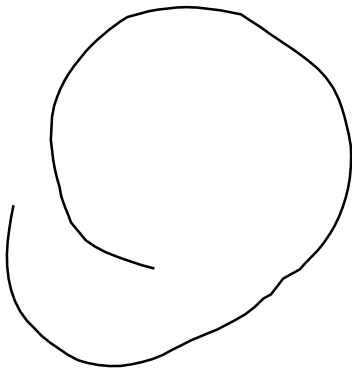
Neither B nor C (1 vote)

Questionnaire 6, Question 2 / 31

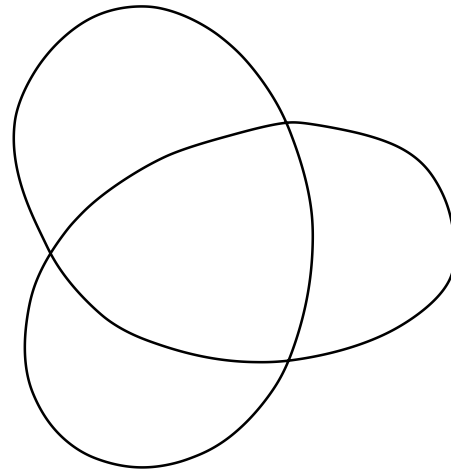
Which of the clean drawings below, B or C, more accurately depicts the rough drawing A on top? If both are equally accurate, please select "Both B and C". If neither, select "Neither B nor C".



A.



B. ([Liu et al. 2018] - 0 votes)



C. (Ours - 6 votes)

Both B and C (0 votes)


Neither B nor C (0 votes)

Questionnaire 6, Question 3 / 31

Which of the clean drawings below, B or C, more accurately depicts the rough drawing A on top? If both are equally accurate, please select "Both B and C". If neither, select "Neither B nor C".



A.



B. (Ours - 3 votes)



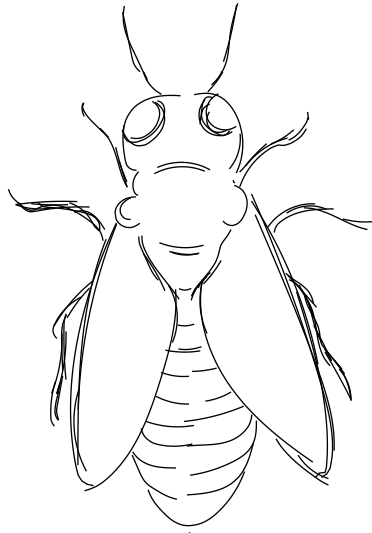
C. ([Liu et al. 2018] - 0 votes)

Both B and C (3 votes)

Neither B nor C (0 votes)

Questionnaire 6, Question 4 / 31


Which of the clean drawings below, B or C, more accurately depicts the rough drawing A on top? If both are equally accurate, please select "Both B and C". If neither, select "Neither B nor C".



A.



B. (Ours - 3 votes)




C. ([Orbay and Kara 2011] - 1 vote)

Both B and C (2 votes)


Neither B nor C (0 votes)

Questionnaire 6, Question 5 / 31


Which of the clean drawings below, B or C, more accurately depicts the rough drawing A on top? If both are equally accurate, please select "Both B and C". If neither, select "Neither B nor C".



A.



B. ([Orbay and Kara 2011] - 0 votes)




C. (Ours - 4 votes)

Both B and C (1 vote)


Neither B nor C (1 vote)

Questionnaire 6, Question 6 / 31


Which of the clean drawings below, B or C, more accurately depicts the rough drawing A on top? If both are equally accurate, please select "Both B and C". If neither, select "Neither B nor C".



A.



B. ([Orbay and Kara 2011] - 0 votes)



C. (Ours - 6 votes)

Both B and C (0 votes)


Neither B nor C (0 votes)

Questionnaire 6, Question 7 / 31

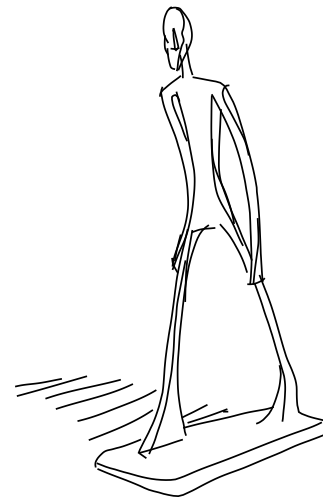
Which of the clean drawings below, B or C, more accurately depicts the rough drawing A on top? If both are equally accurate, please select "Both B and C". If neither, select "Neither B nor C".



A.



B. (Ours - 1 vote)




C. ([Liu et al. 2018] - 1 vote)

Both B and C (4 votes)

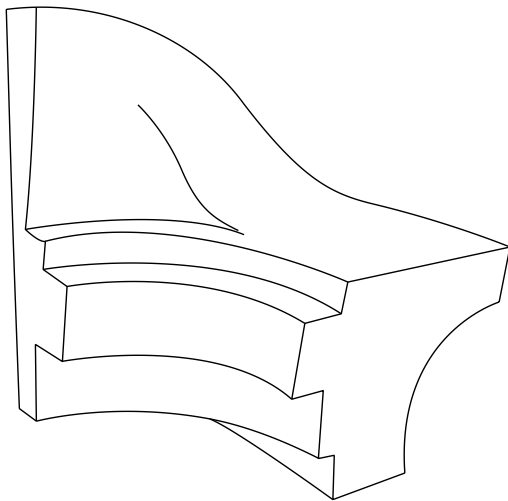
Neither B nor C (0 votes)

Questionnaire 6, Question 8 / 31

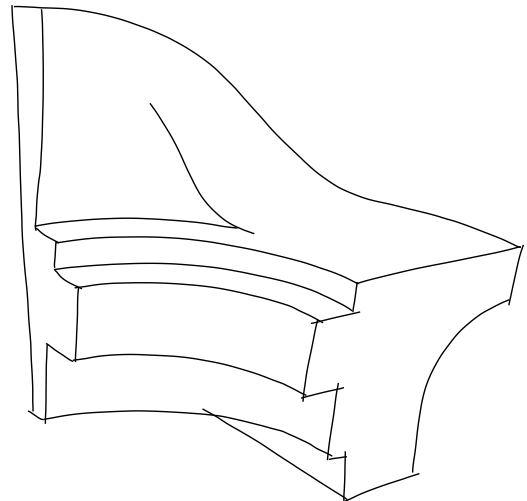
Which of the clean drawings below, B or C, more accurately depicts the rough drawing A on top? If both are equally accurate, please select "Both B and C". If neither, select "Neither B nor C".



A.



B. (Human - 4 votes)




C. (Ours - 1 vote)

Both B and C (1 vote)


Neither B nor C (0 votes)

Questionnaire 6, Question 9 / 31

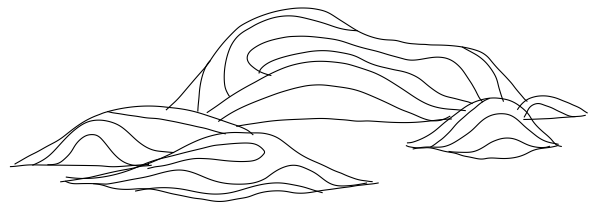
Which of the clean drawings below, B or C, more accurately depicts the rough drawing A on top? If both are equally accurate, please select "Both B and C". If neither, select "Neither B nor C".



A.



B. ([Orbay and Kara 2011] - 0 votes)




C. (Ours - 3 votes)

Both B and C (3 votes)


Neither B nor C (0 votes)

Questionnaire 6, Question 10 / 31

Which of the clean drawings below, B or C, more accurately depicts the rough drawing A on top? If both are equally accurate, please select "Both B and C". If neither, select "Neither B nor C".



A.



B. (Ours - 6 votes)

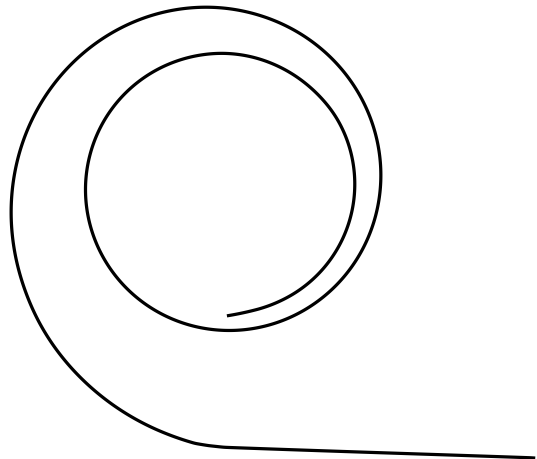

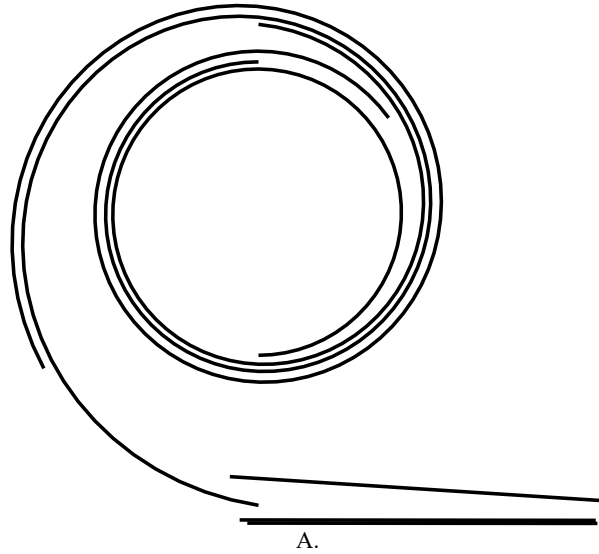
C. ([Liu et al. 2018] - 0 votes)

Both B and C (0 votes)

Neither B nor C (0 votes)

Questionnaire 6, Question 11 / 31

Which of the clean drawings below, B or C, more accurately depicts the rough drawing A on top? If both are equally accurate, please select "Both B and C". If neither, select "Neither B nor C".



Both B and C (0 votes)


Neither B nor C (2 votes)

Questionnaire 6, Question 12 / 31


Which of the clean drawings below, B or C, more accurately depicts the rough drawing A on top? If both are equally accurate, please select "Both B and C". If neither, select "Neither B nor C".



A.



B. (Ours - 1 vote)





C. (Human - 3 votes)

Both B and C (2 votes)

Neither B nor C (0 votes)

Questionnaire 6, Question 13 / 31

Which of the clean drawings below, B or C, more accurately depicts the rough drawing A on top? If both are equally accurate, please select "Both B and C". If neither, select "Neither B nor C".



Both B and C (0 votes)

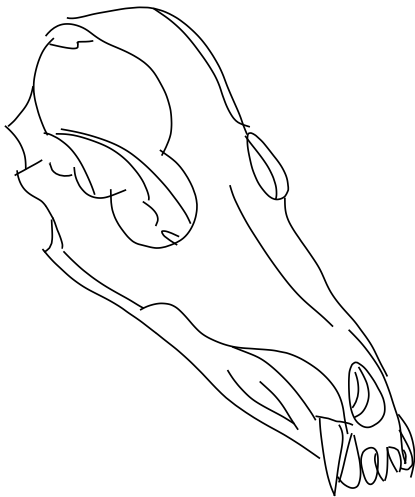
Neither B nor C (0 votes)

Questionnaire 6, Question 14 / 31

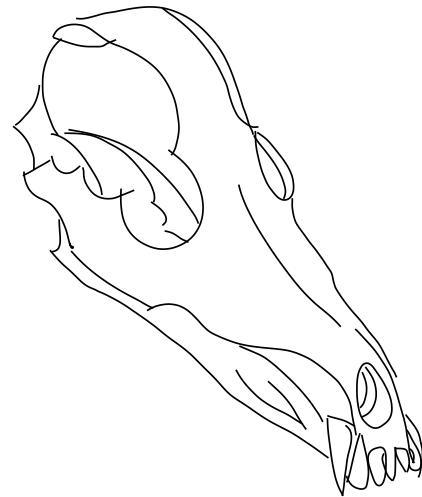
Which of the clean drawings below, B or C, more accurately depicts the rough drawing A on top? If both are equally accurate, please select "Both B and C". If neither, select "Neither B nor C".



A.



B. ([Orbay and Kara 2011] - 1 vote)



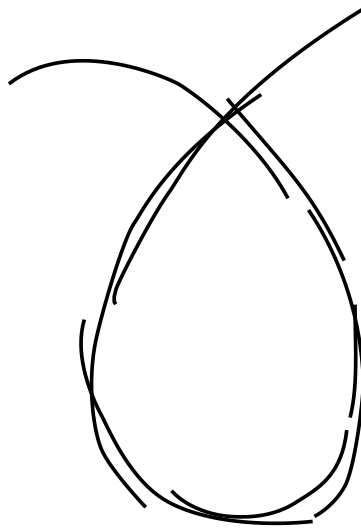
C. (Ours - 2 votes)

Both B and C (3 votes)

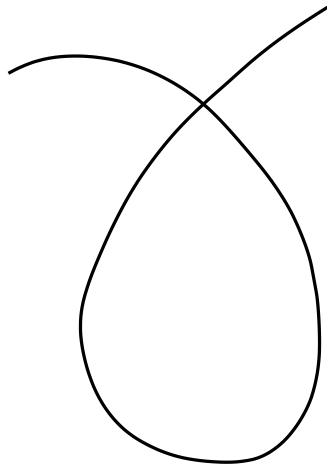
Neither B nor C (0 votes)

Questionnaire 6, Question 15 / 31

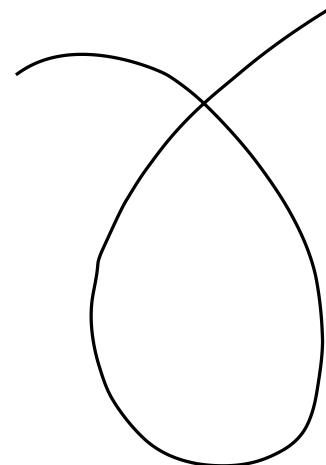
Which of the clean drawings below, B or C, more accurately depicts the rough drawing A on top? If both are equally accurate, please select "Both B and C". If neither, select "Neither B nor C".



A.



B. ([Orbay and Kara 2011] - 3 votes)



C. (Ours - 0 votes)

Both B and C (3 votes)


Neither B nor C (0 votes)

Questionnaire 6, Question 16 / 31


Which of the clean drawings below, B or C, more accurately depicts the rough drawing A on top? If both are equally accurate, please select "Both B and C". If neither, select "Neither B nor C".



A.



B. (Ours - 3 votes)




C. ([Orbay and Kara 2011] - 1 vote)

Both B and C (1 vote)

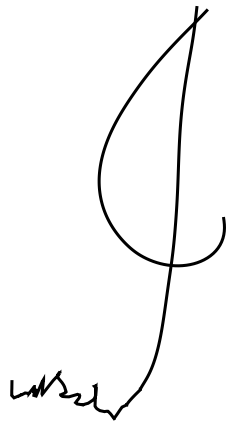
Neither B nor C (1 vote)

Questionnaire 6, Question 17 / 31


Which of the clean drawings below, B or C, more accurately depicts the rough drawing A on top? If both are equally accurate, please select "Both B and C". If neither, select "Neither B nor C".



A.



B. ([Orbay and Kara 2011] - 0 votes)



C. (Ours - 6 votes)

Both B and C (0 votes)

Neither B nor C (0 votes)

Questionnaire 6, Question 18 / 31


Which of the clean drawings below, B or C, more accurately depicts the rough drawing A on top? If both are equally accurate, please select "Both B and C". If neither, select "Neither B nor C".



A.



B. (Ours - 1 vote)



C. ([Liu et al. 2018] - 0 votes)

Both B and C (5 votes)


Neither B nor C (0 votes)

Questionnaire 6, Question 19 / 31


Which of the clean drawings below, B or C, more accurately depicts the rough drawing A on top? If both are equally accurate, please select "Both B and C". If neither, select "Neither B nor C".



A.



B. ([Orbay and Kara 2011] - 1 vote)



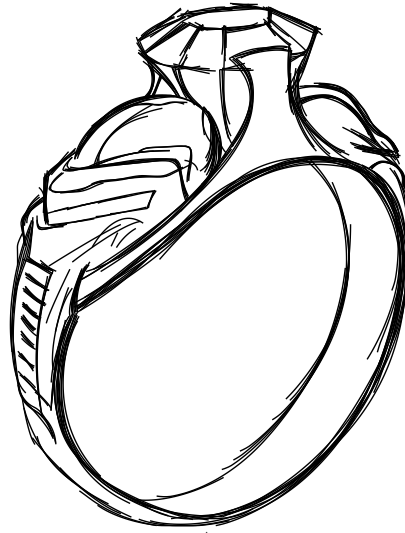
C. (Ours - 0 votes)

Both B and C (4 votes)

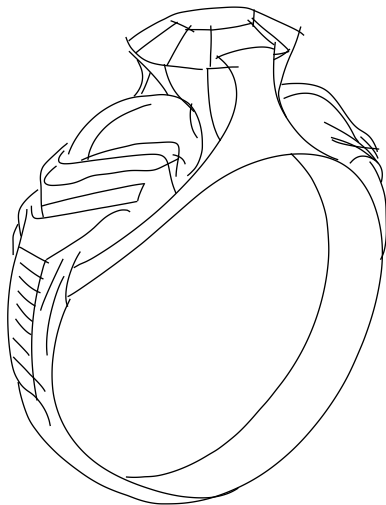
Neither B nor C (1 vote)

Questionnaire 6, Question 20 / 31

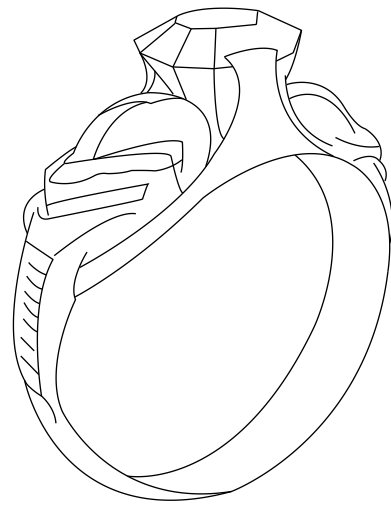
Which of the clean drawings below, B or C, more accurately depicts the rough drawing A on top? If both are equally accurate, please select "Both B and C". If neither, select "Neither B nor C".



A.



B. (Ours - 3 votes)



C. (Human - 2 votes)

Both B and C (1 vote)

Neither B nor C (0 votes)

Questionnaire 6, Question 21 / 31

Which of the clean drawings below, B or C, more accurately depicts the rough drawing A on top? If both are equally accurate, please select "Both B and C". If neither, select "Neither B nor C".



A.



B. (Human - 4 votes)

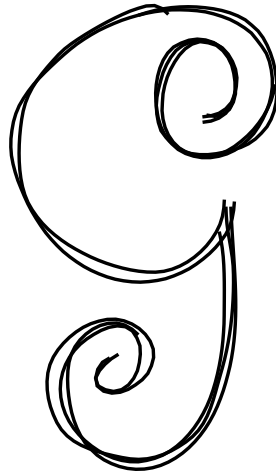


C. (Ours - 1 vote)


Both B and C (1 vote)

Neither B nor C (0 votes)


Which of the clean drawings below, B or C, more accurately depicts the rough drawing A on top? If both are equally accurate, please select "Both B and C". If neither, select "Neither B nor C".



A.



B. (Ours - 6 votes)




C. ([Liu et al. 2018] - 0 votes)

Both B and C (0 votes)


Neither B nor C (0 votes)

Questionnaire 6, Question 23 / 31


Which of the clean drawings below, B or C, more accurately depicts the rough drawing A on top? If both are equally accurate, please select "Both B and C". If neither, select "Neither B nor C".



A.



B. (Ours - 6 votes)




C. ([Orbay and Kara 2011] - 0 votes)

Both B and C (0 votes)


Neither B nor C (0 votes)

Questionnaire 6, Question 24 / 31


Which of the clean drawings below, B or C, more accurately depicts the rough drawing A on top? If both are equally accurate, please select "Both B and C". If neither, select "Neither B nor C".



A.



B. ([Orbay and Kara 2011] - 0 votes)



C. (Ours - 5 votes)

Both B and C (1 vote)

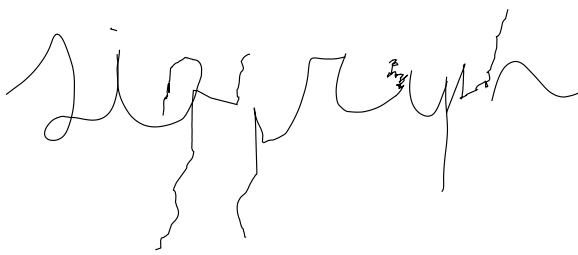
Neither B nor C (0 votes)

Questionnaire 6, Question 25 / 31


Which of the clean drawings below, B or C, more accurately depicts the rough drawing A on top? If both are equally accurate, please select "Both B and C". If neither, select "Neither B nor C".



A.



B. ([Orbay and Kara 2011] - 0 votes)



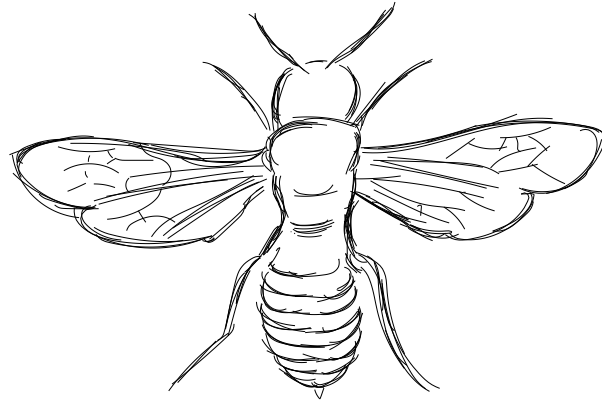
C. (Ours - 6 votes)

Both B and C (0 votes)

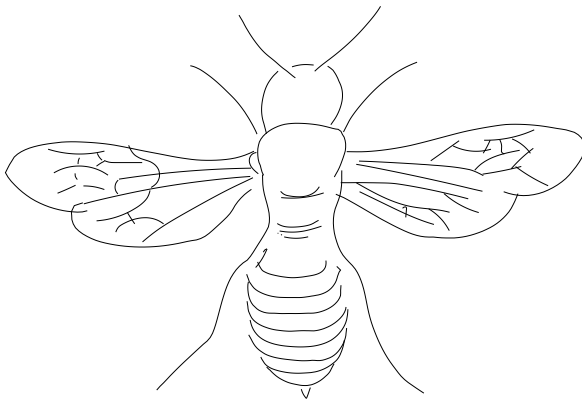
Neither B nor C (0 votes)

Questionnaire 6, Question 26 / 31

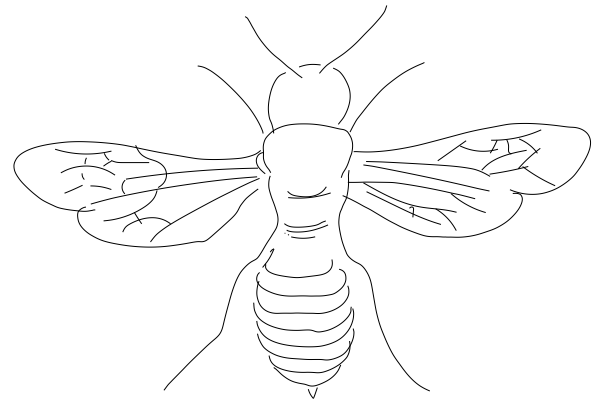
Which of the clean drawings below, B or C, more accurately depicts the rough drawing A on top? If both are equally accurate, please select "Both B and C". If neither, select "Neither B nor C".



A.



B. ([Liu et al. 2018] - 0 votes)




C. (Ours - 1 vote)

Both B and C (5 votes)


Neither B nor C (0 votes)

Questionnaire 6, Question 27 / 31


Which of the clean drawings below, B or C, more accurately depicts the rough drawing A on top? If both are equally accurate, please select "Both B and C". If neither, select "Neither B nor C".



A.



B. (Ours - 6 votes)



C. ([Liu et al. 2018] - 0 votes)

Both B and C (0 votes)

Neither B nor C (0 votes)

Questionnaire 6, Question 28 / 31

Which of the clean drawings below, B or C, more accurately depicts the rough drawing A on top? If both are equally accurate, please select "Both B and C". If neither, select "Neither B nor C".



A.



B. (Ours - 4 votes)




C. ([Orbay and Kara 2011] - 0 votes)

Both B and C (2 votes)


Neither B nor C (0 votes)

Questionnaire 6, Question 30 / 31

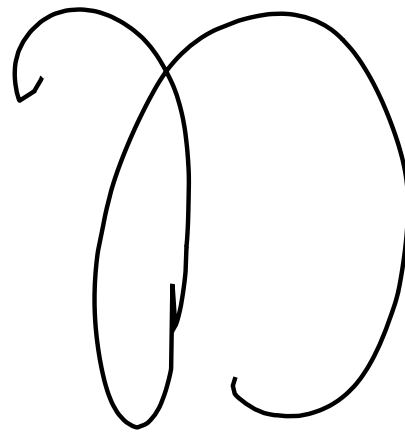
Which of the clean drawings below, B or C, more accurately depicts the rough drawing A on top? If both are equally accurate, please select "Both B and C". If neither, select "Neither B nor C".



A.



B. (Ours - 6 votes)




C. ([Orbay and Kara 2011] - 0 votes)

Both B and C (0 votes)

Neither B nor C (0 votes)

Questionnaire 6, Question 31 / 31

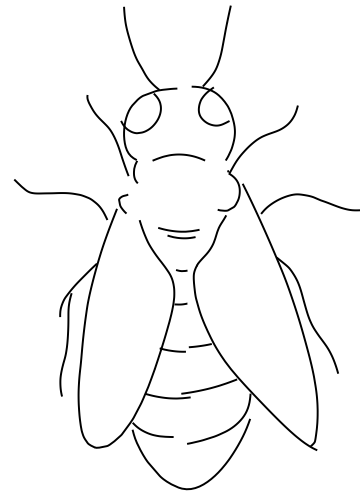
Which of the clean drawings below, B or C, more accurately depicts the rough drawing A on top? If both are equally accurate, please select "Both B and C". If neither, select "Neither B nor C".



A.



B. (Ours - 3 votes)



C. ([Orbay and Kara 2011] - 0 votes)

Both B and C (3 votes)

Neither B nor C (0 votes)